

**FOR GRADER USE ONLY**

Score Test Below:

\_\_\_\_\_ Initials \_\_\_\_\_

\_\_\_\_\_ Initials \_\_\_\_\_

Papers contending to place:

\_\_\_\_\_ Initials \_\_\_\_\_



**University Interscholastic League  
A+ Maps/Graphs/Charts Contest • Answer Sheet**

*Write your contestant number in the upper right corner, and circle your grade below.*

**Circle Grade Level:                    5        6        7        8**


- |       |   |   |   |       |   |       |   |       |   |   |   |
|-------|---|---|---|-------|---|-------|---|-------|---|---|---|
| 1. A  | B | C | D | 26. T | F | 51. A | B | C     | D |   |   |
| 2. A  | B | C | D | 27. T | F | 52. A | B | C     | D |   |   |
| 3. A  | B | C | D | 28. T | F | 53. A | B | C     | D |   |   |
| 4. A  | B | C | D | 29. T | F | 54. A | B | C     | D |   |   |
| 5. A  | B | C | D | 30. T | F | 55. A | B | C     | D |   |   |
| 6. A  | B | C | D | 31. A | B | C     | D | 56. A | B | C | D |
| 7. A  | B | C | D | 32. A | B | C     | D | 57. A | B | C | D |
| 8. A  | B | C | D | 33. A | B | C     | D | 58. A | B | C | D |
| 9. A  | B | C | D | 34. A | B | C     | D | 59. A | B | C | D |
| 10. A | B | C | D | 35. A | B | C     | D | 60. A | B | C | D |
| 11. A | B | C | D | 36. A | B | C     | D | 61. A | B | C | D |
| 12. A | B | C | D | 37. A | B | C     | D | 62. A | B | C | D |
| 13. A | B | C | D | 38. A | B | C     | D | 63. A | B | C | D |
| 14. A | B | C | D | 39. A | B | C     | D | 64. A | B | C | D |
| 15. A | B | C | D | 40. A | B | C     | D | 65. A | B | C | D |
| 16. A | B | C | D | 41. T | F | 66. A | B | C     | D |   |   |
| 17. A | B | C | D | 42. T | F | 67. A | B | C     | D |   |   |
| 18. A | B | C | D | 43. T | F | 68. A | B | C     | D |   |   |
| 19. A | B | C | D | 44. T | F | 69. A | B | C     | D |   |   |
| 20. A | B | C | D | 45. T | F | 70. A | B | C     | D |   |   |
| 21. A | B | C | D | 46. A | B | C     | D | 71. T | F |   |   |
| 22. A | B | C | D | 47. A | B | C     | D | 72. T | F |   |   |
| 23. A | B | C | D | 48. A | B | C     | D | 73. T | F |   |   |
| 24. A | B | C | D | 49. A | B | C     | D | 74. T | F |   |   |
| 25. A | B | C | D | 50. A | B | C     | D | 75. T | F |   |   |

**INVITATIONAL 2019-2020**

**A+ ACADEMICS**



University Interscholastic League



# Maps, Graphs & Charts

grades 5 & 6

**DO NOT OPEN TEST  
UNTIL TOLD TO DO SO**

**THIS PAGE IS INTENTIONALLY BLANK.**

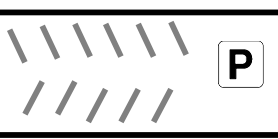
## Asia Political Relief Map

1. Which town of over 1,000,000 people is the furthest west?
  - a. Aden, Yemen
  - b. Macau(o), China
  - c. Chennai, India
  - d. Medan, Indonesia
2. Which of the following countries does not have a border on the Arabian Sea?
  - a. India
  - b. Saudi Arabia
  - c. Oman
  - d. Pakistan
3. The International Date Line Crosses what body of water?
  - a. The Pacific Ocean
  - b. The Indian Ocean
  - c. The South China Sea
  - d. None of the above
4. What capital can be found at 79.8612° E?
  - a. Astana, Kazakhstan
  - b. Kanpur, India
  - c. Istanbul, Turkey
  - d. Colombo, Sri Lanka
5. The Taklimakan Desert is in what country?
  - a. Iran
  - b. Saudi Arabia
  - c. Kazakhstan
  - d. China
6. Which of the following bodies of water forms a border with another continent?
  - a. Persian Gulf
  - b. Black Sea
  - c. Yellow Sea
  - d. Bay of Bengal
7. How far is it from the largest city in the country of Kazakhstan to the capital of the country?
  - a. About 100 miles
  - b. About 300 miles
  - c. About 400 miles
  - d. About 600 miles
8. The Volcano Islands is a territory of what country?
  - a. China
  - b. Japan
  - c. Indonesia
  - d. Russia
9. Which line of latitude runs through the country of Bangladesh?
  - a. The Equator
  - b. The Tropic of Cancer
  - c. The Tropic of Capricorn
  - d. None
10. Half an inch equals how many miles?
  - a. 340 miles
  - b. 680 miles
  - c. 750 miles
  - d. 1,000 miles
11. What do the lines of small black dots represent?
  - a. Latitude lines
  - b. Longitude lines
  - c. International Boundary
  - d. Disputed Boundary
12. The Lena River runs through which of the following countries?
  - a. China
  - b. India
  - c. Iran
  - d. None of the above
13. Which of the following cities has a population under 1,000,000?
  - a. Padang, Indonesia
  - b. Omsk, Russia
  - c. Kyoto, Japan
  - d. Mumbai, India
14. Which of the following countries does The Equator run through?
  - a. Yemen
  - b. Indonesia
  - c. Vietnam
  - d. Bangladesh
15. Which of the following is actually a lake?
  - a. South China Sea
  - b. Arabian Sea
  - c. Caspian Sea
  - d. Yellow Sea



Downtown 10 Miles

Shell Beach 2 miles



Entrance

**Dolphin Bay**



**Crustacean Corner**

**Penguin House**

**Jellyfish Display**

**Underwater Mermaid Show**

**Play Ground Area**



**String Ray Petting Zoo**

**Main Gift Shop**

**Shark Reef**

**Octopus Garden**

**Tropical Waters**



### Services

- Restrooms
- Water Fountain
- Restaurant
- Parking
- First Aid
- Information
- Exit
- ATM
- Picnic Area
- Gift Shop

Hours:  
Open Daily  
10 - 8



## South Coast Aquarium

## South Coast Aquarium

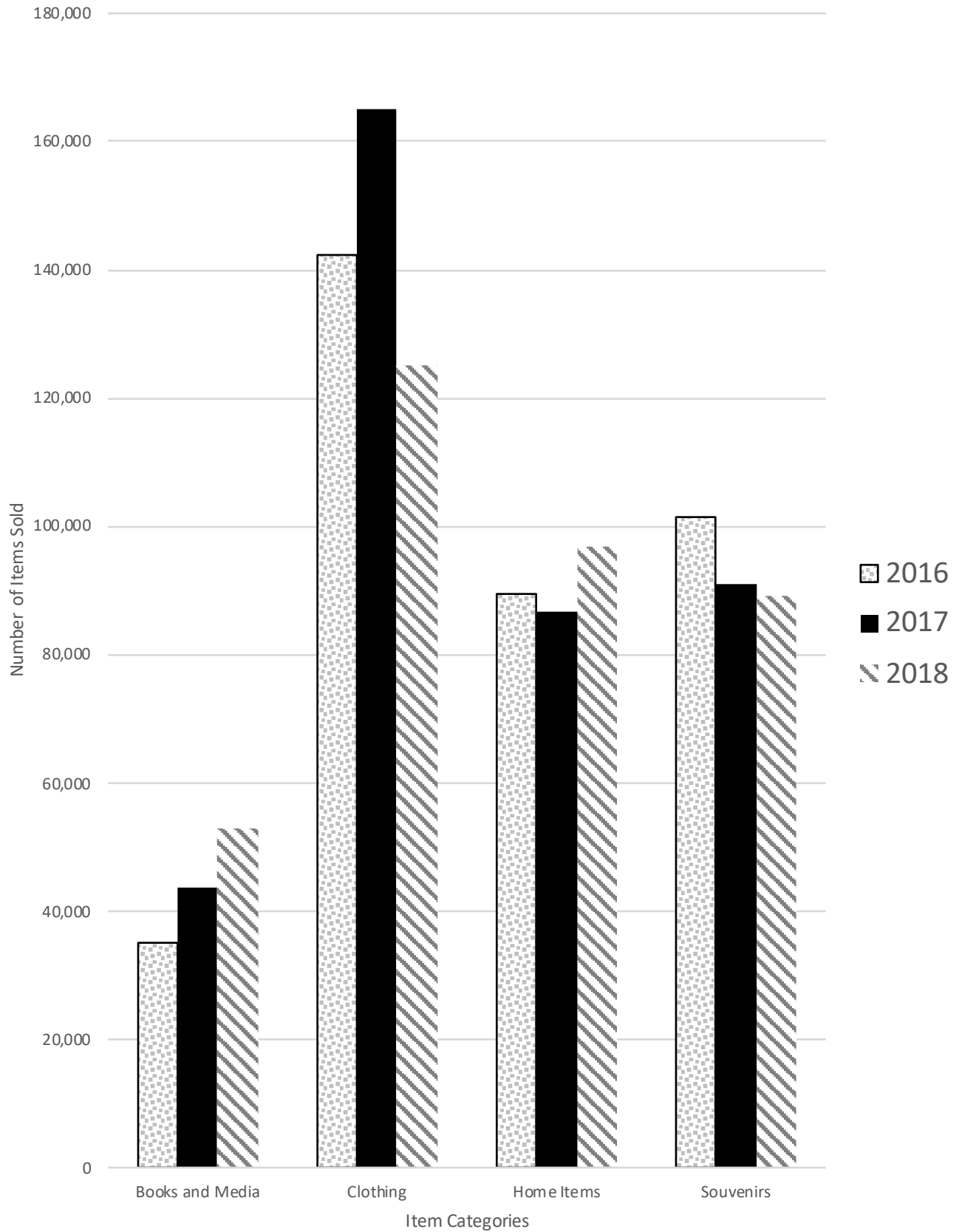
16. What direction would you need to go from Shell Beach to arrive at the aquarium?
- East
  - West
  - North
  - South
17. How many of the areas/attractions host restaurants?
- 1
  - 2
  - 3
  - 4
18. What scale is indicated on the map?
- 1 inch equals  $\frac{1}{4}$  mile
  - 1 inch equals  $\frac{1}{2}$  mile
  - 1 inch equals 1 mile
  - Not indicated
19. Which of the following attractions has a first aid station?
- Jellyfish Display
  - Dolphin Bay
  - Underwater Mermaid Show
  - Shark Reef
20. How many parking areas are indicated on the map?
- 1
  - 2
  - 3
  - 0

21. How many gift shops are there?
- 2
  - 3
  - 4
  - 5
22. How far is the aquarium from downtown?
- 2 miles
  - 5 miles
  - 10 miles
  - 20 miles
23. Which animal attraction is the furthest west?
- Penguin House
  - Sting Ray Petting Zoo
  - Jellyfish Display
  - Dolphin Bay
24. How many hours is the aquarium open on a daily basis?
- 6
  - 8
  - 10
  - 12
25. How many types of services are indicated on the map?
- 4
  - 7
  - 10
  - 13

### TRUE/FALSE

26. Every attraction includes at least one service.
27. The entrance is in the southwest corner of the grounds.
28. Downtown is south of Shell Beach.
29. Octopus Garden is east of Shark Reef.
30. The aquarium is closed on Sundays.

# Gift Shop Item Sales By Year



## Gift Shop Item Sales by Year

31. Which category had the most sales in 2016?
- Books and media
  - Clothing
  - Home Items
  - Souvenirs
32. How many categories are displayed on the graph?
- 4
  - 8
  - 12
  - 16
33. How many individual items (such as t-shirts, shoes, shorts, etc.) are included within the clothing category?
- 5
  - 10
  - 15
  - Not indicated
34. What year did Books and Media have the highest sales?
- 2018
  - 2017
  - 2016
  - None of the above
35. Which category had the highest number of sales for all years combined?
- Books and media
  - Clothing
  - Home Items
  - Souvenirs
36. What does the solid black bar represent?
- Books and media
  - Clothing
  - 2016
  - 2017
37. Which category had a decrease in sales every year?
- Books and media
  - Clothing
  - Home Items
  - Souvenirs
38. Which category had the single greatest increase in sales in one year?
- Books and media
  - Clothing
  - Home Items
  - Souvenirs
39. In how many years did home items outsell souvenirs?
- 0
  - 1
  - 2
  - 3
40. How many items in the clothing category were sold in 2016?
- About 123,000
  - About 142,000
  - About 42,000
  - About 23,000
- TRUE/FALSE**
41. 2017 saw the highest amount of sales for clothing.
42. Books and Media always had the fewest amount of sales.
43. Books and Media is the only category that saw an increase in sales every year.
44. The graph indicates the month that the highest yearly sales occur.
45. Clothing sales go up every year.

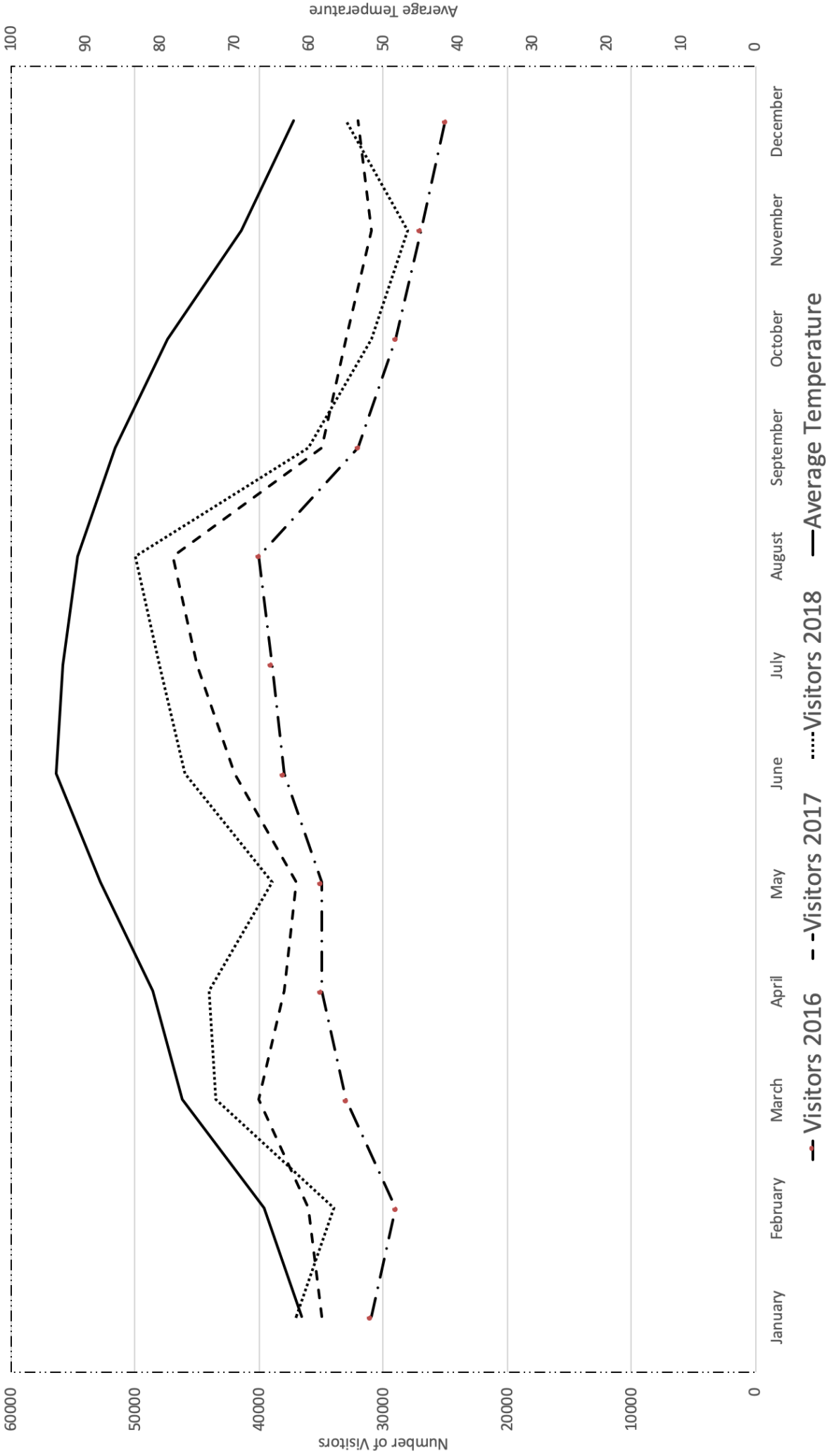


**THIS PAGE IS INTENTIONALLY BLANK.**

## Australia and Its Neighbors Land Cover and Elevation Maps

46. Rainforest can be found in what area of Australia?
- Eastern coast
  - Western coast
  - Middle of the country
  - Not found in Australia
47. How far is it from Brisbane to Sydney?
- About 300 miles
  - About 450 miles
  - About 600 miles
  - About 750 miles
48. What does the Wallace Line indicate?
- Areas of cultural influence boundary
  - A disputed international boundary
  - The continental boundary
  - Relations of animal species
49. What is the elevation of Lake Eyre?
- Below sea level
  - 500 to 1,000 feet
  - 1,000 to 2,000 feet
  - 2,000 to 5,000 feet
50. What does the blue line with white dots represent?
- Areas of cultural influence boundary
  - A disputed international boundary
  - The continental boundary
  - Relations of animal species
51. Wellington is the capital of what country?
- Australia
  - Indonesia
  - New Zealand
  - Vanuatu
52. How much of the continent does the outback cover?
- 10%
  - 20%
  - 40%
  - 80%
53. The land cover in New Guinea is mostly of what type?
- Grassland
  - Cropland
  - Tropical rain forest
  - Broadleaf forest
54. The Maoke Mountains can be found in what country?
- Australia
  - Indonesia
  - New Zealand
  - Vanuatu
55. What is the elevation of the highest mountain peak on the continent?
- 2,000 to 5,000 feet
  - 5,000 to 10,000 feet
  - 1,500 to 3,000 meters
  - Over 3,000 meters
56. The cross section on the elevation map covers how many degrees of latitude?
- 7 degrees
  - 23 degrees
  - 90 degrees
  - About 110 degrees
57. Shark Bay is located on what Australian coast?
- Northern
  - Southern
  - Eastern
  - Western
58. What does the pink line across the island of New Guinea indicate?
- Areas of cultural influence boundary
  - An international boundary
  - The continental boundary
  - Relations of animal species
59. What is the scale of the cross-section on the elevation map?
- One inch equals 470 miles
  - One inch equals 565 miles
  - One inch equals 358 miles
  - Not indicated
60. Tasmania is off the southern coast of what country?
- Australia
  - Indonesia
  - New Zealand
  - Vanuatu

# Aquarium Visitor Information By Month



## Aquarium Visitor Information by Month

61. What does the solid black line represent?
- Average temperature
  - 2016
  - 2017
  - 2018
62. How many years are represented on the graph?
- 3
  - 4
  - 12
  - 48
63. What year had the lowest attendance in every month?
- 2016
  - 2017
  - 2018
  - None
64. What single month had the highest attendance?
- June, 2017
  - July, 2018
  - August, 2018
  - December, 2018
65. How many times did attendance in 2018 surpass the same month in 2017?
- 0
  - 5
  - 7
  - 9
66. Which of the following months had the highest attendance for all three years?
- June
  - July
  - August
  - September
67. What does the x axis represent?
- Average Temperature
  - Number of Visitors
  - Month
  - Average visitor age
68. In 2016, which month had the highest jump in number of visitors compared to the previous month?
- January
  - February
  - March
  - April
69. How many times did monthly visitors pass the 60,000 mark?
- 0
  - 2
  - 3
  - 4
70. Which of the following months had the highest average temperature?
- February
  - March
  - September
  - October
- TRUE/FALSE**
71. As the temperature rises attendance generally goes up.
72. In 2018, November had the fewest visitors.
73. 2016 saw the lowest number of total visitors.
74. All the lines on the graph represent the same number range (0 to 60,000).
75. The graph suggests what days of the week that the Aquarium gets the most visitors.



**University Interscholastic League**  
**A+ Maps/Graphs/Charts Contest • 2019-2020**  
**5/6 Invitational**  
**Answer Key**


1. C	26. F	51. C
2. B	27. T	52. D
3. A	28. F	53. C
4. D	29. T	54. B
5. D	30. F	55. D
6. B	31. B	56. A
7. D	32. A	57. D
8. B	33. D	58. B
9. B	34. A	59. A
10. A	35. B	60. A
11. C	36. D	61. A
12. D	37. D	62. A
13. A	38. B	63. A
14. B	39. B	64. C
15. C	40. B	65. D
16. A	41. T	66. C
17. C	42. T	67. C
18. D	43. T	68. C
19. C	44. F	69. A
20. A	45. F	70. C
21. D	46. A	71. T
22. C	47. B	72. T
23. A	48. D	73. T
24. C	49. A	74. F
25. C	50. C	75. F

**INVITATIONAL 2019-2020**

**A+ ACADEMICS**



University Interscholastic League



# Maps, Graphs & Charts

grades 7 & 8

**DO NOT OPEN TEST  
UNTIL TOLD TO DO SO**

**THIS PAGE IS INTENTIONALLY BLANK.**

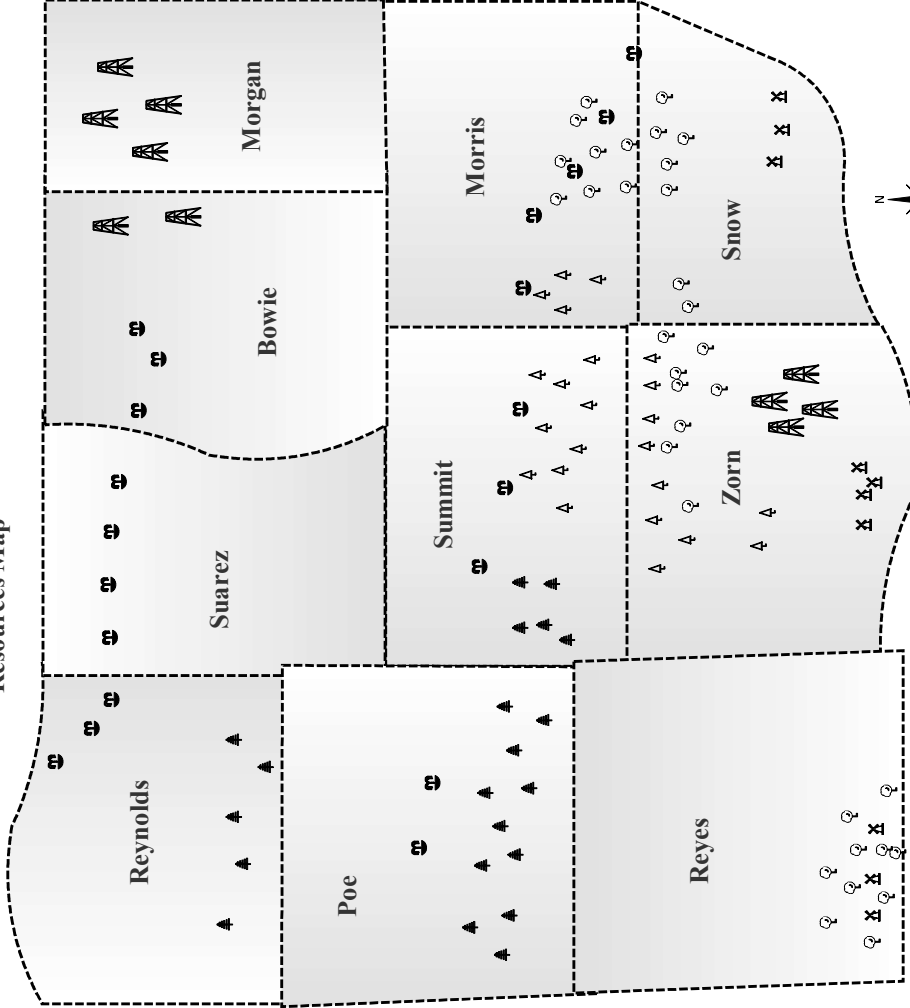
## South America

1. What is the European ethnic composition percentage in Peru?
  - a. 12
  - b. 54
  - c. 47
  - d. 3.7
2. What does the red line on the Elevation Map represent?
  - a. continental boundary
  - b. international boundary
  - c. time zone
  - d. other
3. What is the climate type in southern Chile?
  - a. Tropical
  - b. Steppe
  - c. Mediterranean
  - d. Marine
4. The Andes do not run through which of the following countries?
  - a. Venezuela
  - b. Uruguay
  - c. Ecuador
  - d. Peru
5. San Felix Island is a territory of what country?
  - a. Brazil
  - b. Chile
  - c. Argentina
  - d. Guyana
6. Which of these Brazilian cities has the largest population?
  - a. Natal
  - b. Boa Vista
  - c. Macapa
  - d. Belem
7. How far is it from Rosario, Argentina to the capital of the country?
  - a. About 100 miles
  - b. About 175 miles
  - c. About 300 miles
  - d. About 500 miles
8. The Uruguay River is part of the border of Brazil and what other country?
  - a. Argentina
  - b. Peru
  - c. Suriname
  - d. French Guiana
9. What is the main land cover type in Guyana?
  - a. Cropland
  - b. Greenland
  - c. Tropical Rain Forest
  - d. Broadleaf forest
10. Which country is the most densely populated?
  - a. Brazil
  - b. Venezuela
  - c. Colombia
  - d. Ecuador
11. Which of the following crops grows at an elevation of 8,000 feet?
  - a. Bananas
  - b. Wheat
  - c. Barley
  - d. Rice
12. Which of the following resources can be found in Paraguay?
  - a. Coal
  - b. Gold
  - c. Nickel
  - d. None of the above
13. What is the highest level of annual precipitation that the country of Suriname receives?
  - a. Over 80 inches
  - b. 40 to 80 inches
  - c. 20 to 40 inches
  - d. 10 to 20 inches
14. Which of the following countries appears on the Northwestern South America Map?
  - a. Brazil
  - b. Paraguay
  - c. Argentina
  - d. None
15. What large lake is at the highest elevation?
  - a. Lake Maracaibo
  - b. Lake Titicaca
  - c. Lake Aconcagua
  - d. Mirim Lake



# Western Counties Resources and Population Maps

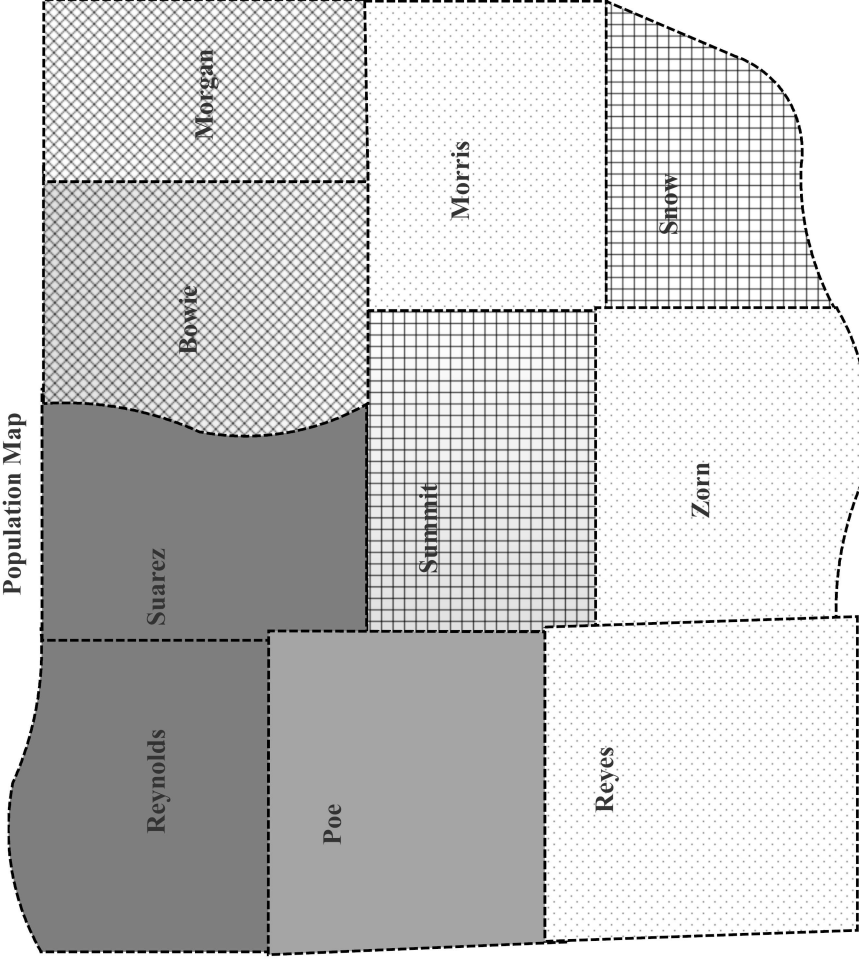
Resources Map



**Legend**

- ..... County Border
- X Wind
- ≡ Lumber
- △ Oil
- ☉ Water
- ☺ Cotton

Population Map



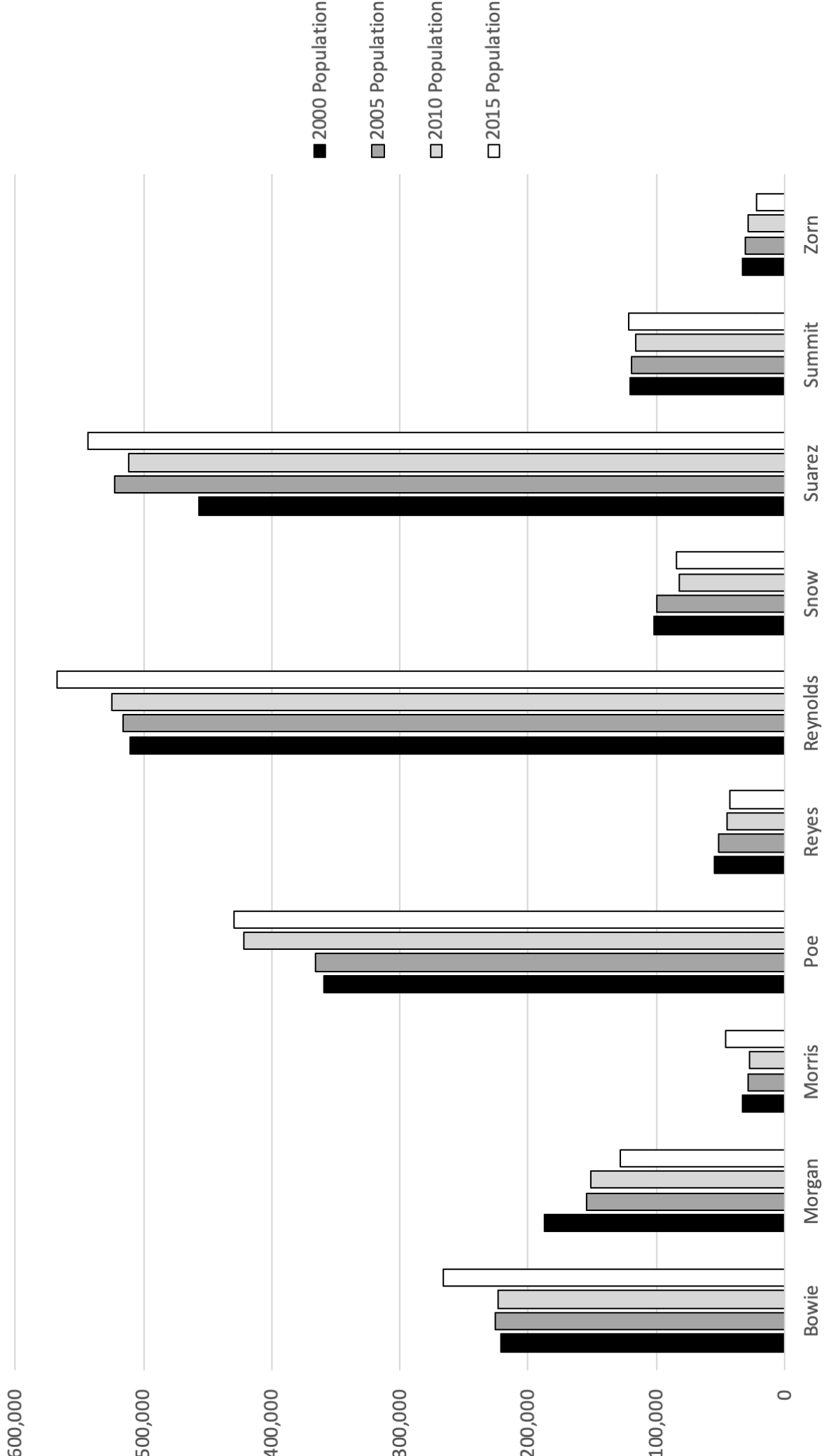
**Population Per sq. mile**

- Under 5
- 5 to 50
- 50 to 100
- 100 to 250
- Over 250

## Western Counties Resources and Population Maps

16. Which of the following counties has the highest population per square mile?
- Zorn
  - Morgan
  - Morris
  - Poe
17. Which county is located south of Zorn?
- Summit
  - Reynolds
  - Morgan
  - None of the above
18. Three inches would equal how many miles on the population map?
- 25
  - 50
  - 75
  - 100
19. Which of the following resources is not present in Morris County?
- Wind
  - Water
  - Cotton
  - Lumber
20. What do the dotted lines represent?
- State lines
  - County borders
  - Resource boundaries
  - City limits
21. How many counties with oil have a population of under 5 per square mile?
- 0
  - 1
  - 2
  - 3
22. Which county has the fewest towns located in it?
- Reynolds
  - Suarez
  - Bowie
  - Not indicated on the map
23. How many counties have cotton listed as a resource?
- 2
  - 3
  - 4
  - 5
24. Which resource can be found in counties that have populations equal to or above 100 per sq. mile?
- Water
  - Oil
  - Cotton
  - All of the above
25. How many resources are represented on the population map?
- 0
  - 6
  - 7
  - 8
- TRUE/FALSE**
26. Zorn is the county with the highest variety of resources.
27. All of the wind resources are in the map's northern counties.
28. The scale of both maps is the same.
29. Oil is the resource found in the most counties on the map.
30. Every county containing wind resources also contains cotton resources.

# County Population



## County Population Chart

31. How many individual years are represented by the graph?
- 4
  - 10
  - 15
  - 20
32. How many counties are displayed on the graph?
- 4
  - 5
  - 10
  - 20
33. What does the darkest bar represent?
- The county of Bowie
  - The county of Poe
  - The year 2000
  - The year 2015
34. What information is found on the Y axis?
- The year
  - The population number
  - The name of the county
  - Both A and C
35. The population of how many counties went down every year shown on the graph?
- 1
  - 2
  - 3
  - 4
36. How many counties hit peak population in 2010?
- 0
  - 1
  - 2
  - 3
37. Which of the following counties had the largest increase in population between 2010 and 2015?
- Poe
  - Reynolds
  - Morgan
  - Snow
38. In what year did Zorn have its highest population?
- 2000
  - 2005
  - 2010
  - 2015
39. Which of the following counties had the greatest decrease in population over the years indicated?
- Reyes
  - Summit
  - Zorn
  - Snow
40. In Poe County, what year saw the biggest jump in population from the previous recorded year?
- 2000
  - 2005
  - 2010
  - 2015

### TRUE/FALSE

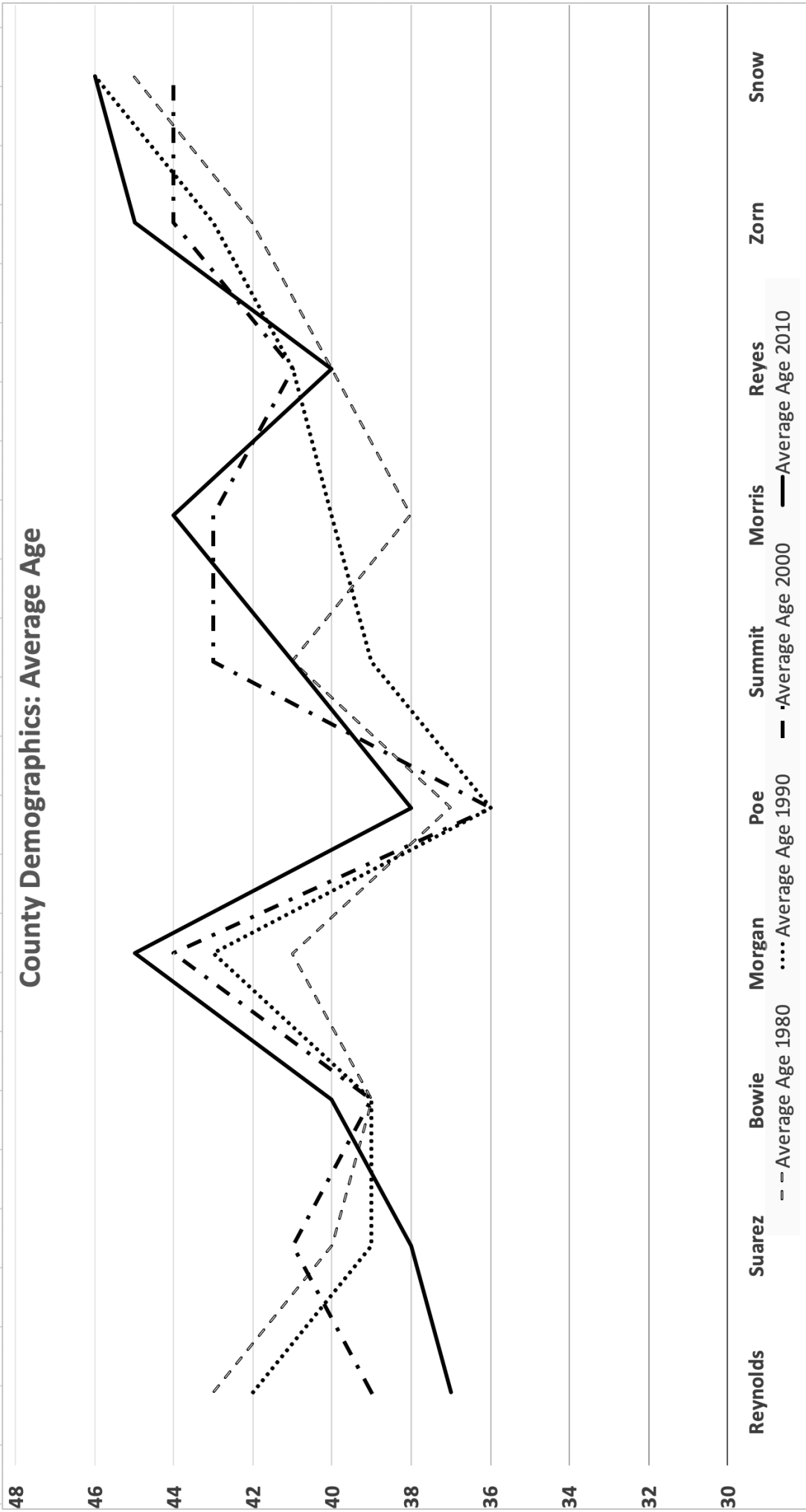
41. The more populous counties tended to gain population.
42. Reynolds always had the highest population.
43. Suarez saw an increase in population every year except 2015.
44. Reyes had a higher population than Morris every year.
45. The graph indicates growth in Reynolds country prior to 2000.

**THIS PAGE IS INTENTIONALLY BLANK.**

## North America

46. What is the yearly precipitation range in Panama?
- Over 80 inches per year
  - 40 to 80 inches per year
  - 20 to 40 inches per year
  - 10 to 20 inches per year
47. How many kilometers is two centimeters on the North Central U.S. map?
- 47
  - 94
  - 140
  - 280
48. What does the red line on the East Central U.S. map indicate?
- continental boundary
  - international boundary
  - interstate highway
  - longitudes
49. What type of agricultural product is produced in New Mexico?
- Corn
  - Wheat
  - Beef
  - Dairy
50. The Bering Strait separates the United States from what country?
- Mexico
  - Russia
  - Canada
  - Cuba
51. Which of the following Canadian provinces has mining with a value of over 5 billion?
- Ontario
  - Yukon Territory
  - Nunavut
  - New Brunswick
52. The largest urban area on the continent is where?
- Eastern United States
  - Western United States
  - Mexico
  - Canada
53. Where can the land cover type tundra be found?
- Mexico
  - Cuba
  - United States
  - None of the above
54. Which country is the largest by area?
- Mexico
  - Cuba
  - United States
  - Canada
55. How many miles is it from Lima, Ohio to Defiance, Ohio?
- About 20 miles
  - About 40 miles
  - About 60 miles
  - About 80 miles
56. What is the main economic use of land in Utah?
- Commercial farming
  - Ranching or herding
  - Forestry
  - No widespread use
57. What is the main climate type in Cuba?
- Tropical Rain Forest
  - Savanna
  - Steppe
  - Desert
58. Guadalupe Island is a territory of what country?
- Mexico
  - Cuba
  - United States
  - Canada
59. The Missouri Rivers forms a border between Iowa and what other state?
- Missouri
  - Minnesota
  - Wisconsin
  - Nebraska
60. Which Canadian province is the furthest west?
- British Columbia
  - Ontario
  - Quebec
  - Alaska

# County Demographics: Average Age



## County Demographics: Average Age

61. Which county had the highest average age in 1990?
- Morgan
  - Summit
  - Reyes
  - Snow
62. What span of time does the graph cover?
- 4 years
  - 10 years
  - 30 years
  - 40 years
63. How much time is it between data points for each county?
- 4 years
  - 10 years
  - 30 years
  - 40 years
64. What year did Summit have its lowest average age?
- 1980
  - 1990
  - 2000
  - 2010
65. Which of the following counties had an older population in every subsequent decade?
- Morgan
  - Reyes
  - Snow
  - Suarez
66. What county had the most change in average age between 1980 and 2010?
- Suarez
  - Poe
  - Snow
  - Reynolds
67. How many times did the average age in Summit go up from the previous decade?
- 0
  - 1
  - 2
  - 3
68. Which of the following counties had the highest average age in 2010?
- Morgan
  - Reynolds
  - Poe
  - Morris
69. What year did the average age of Morris first surpass the average age of Summit?
- 1980
  - 1990
  - 2000
  - 2010
70. Which of the following counties had the least amount of average fluctuation over the time indicated?
- Suarez
  - Zorn
  - Morgan
  - Bowie

### TRUE/FALSE

71. The average age went up every decade in Snow.
72. Reynolds started in 1980 with the oldest population and ended up as the youngest in 2000.
73. The single biggest jump in average age in 2000 was in Summit.
74. Average age decreased every decade in only one county.
75. Poe's average age did not fluctuate from 1980 to 1990.





**University Interscholastic League**  
**A+ Maps/Graphs/Charts Contest • 2019-2020**  
**7/8 Invitational**  
**Answer Key**


1. A	26. T	51. A
2. B	27. F	52. C
3. D	28. T	53. C
4. B	29. F	54. D
5. B	30. T	55. B
6. D	31. A	56. B
7. B	32. C	57. B
8. A	33. C	58. A
9. C	34. B	59. D
10. D	35. C	60. A
11. C	36. A	61. D
12. D	37. B	62. C
13. A	38. A	63. B
14. A	39. D	64. B
15. B	40. C	65. A
16. D	41. T	66. D
17. D	42. F	67. B
18. C	43. F	68. A
19. A	44. F	69. B
20. B	45. F	70. D
21. B	46. A	71. F
22. D	47. B	72. F
23. C	48. C	73. T
24. A	49. D	74. T
25. A	50. B	75. F

**FALL/WINTER DISTRICT 2019-2020**

**A+ ACADEMICS**



University Interscholastic League



# Maps, Graphs & Charts

grades 5 & 6

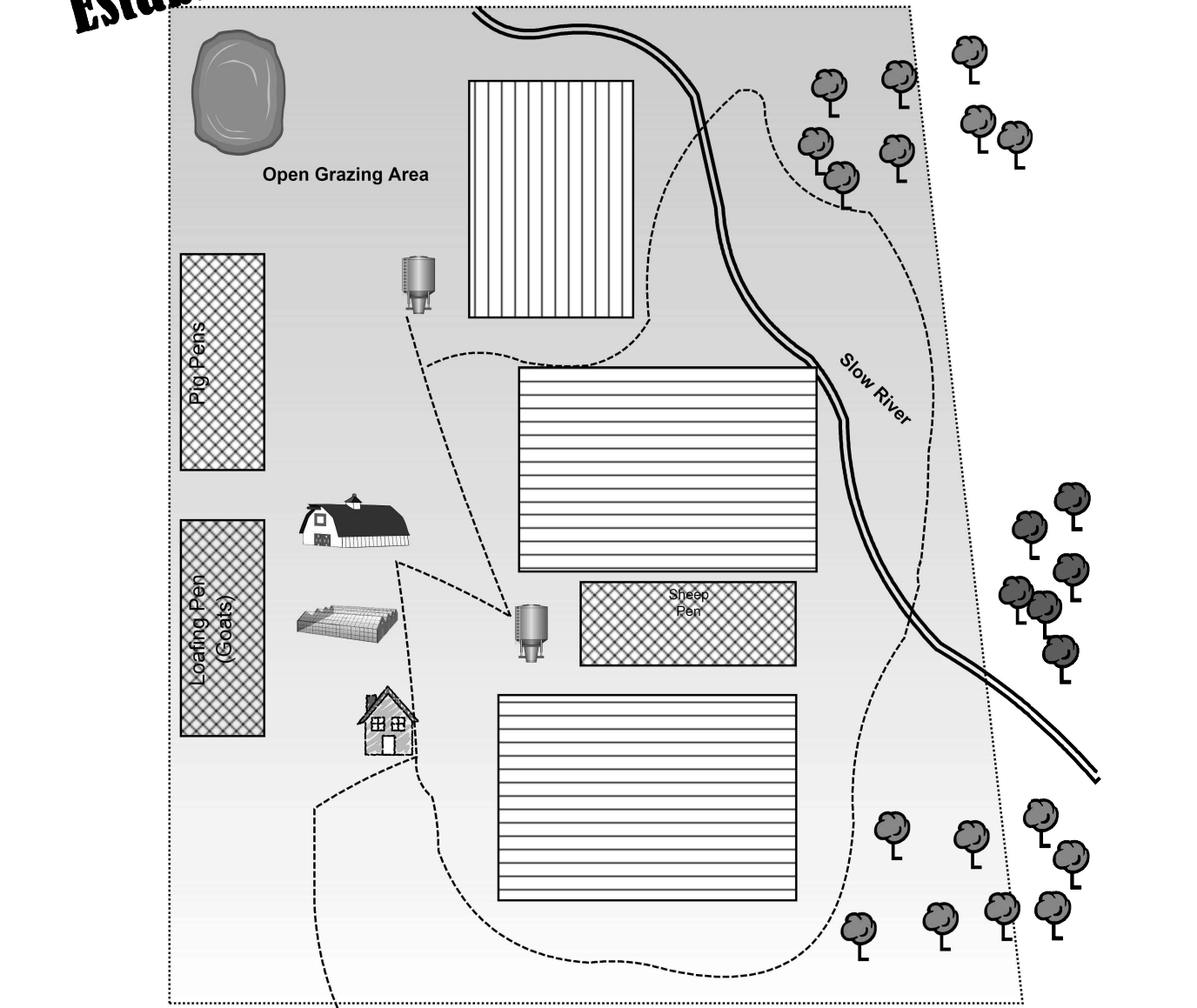
**DO NOT OPEN TEST  
UNTIL TOLD TO DO SO**

**THIS PAGE IS INTENTIONALLY BLANK.**

## Africa Political Relief Map

1. What body of water forms part of the southern border of Uganda?
  - a. Indian Ocean
  - b. Gulf of Guinea
  - c. Lake Victoria
  - d. Gulf of Sidra
2. Two centimeters equal how many kilometers on the map?
  - a. 730
  - b. 1460
  - c. 463
  - d. 926
3. Which of the following capitals is located north of the equator?
  - a. Luanda, Angola
  - b. Rabat, Morocco
  - c. Cape Town, South Africa
  - d. Nairobi, Kenya
4. The Strait of Gibraltar separates Africa from what other continent?
  - a. Europe
  - b. Asia
  - c. Antarctica
  - d. Australia and Oceania
5. The Niger River does not flow through which of the following countries?
  - a. Mali
  - b. Guinea
  - c. Nigeria
  - d. Algeria
6. Prince Edward Island is a territory of which of the following countries?
  - a. South Africa
  - b. Somalia
  - c. United Kingdom
  - d. Spain
7. How far is it from the capital of Tunisia to the capital of Libya?
  - a. About 100 miles
  - b. About 300 miles
  - c. About 400 miles
  - d. About 600 miles
8. Which of the following cities has a population over 500,000?
  - a. Ibadan, Nigeria
  - b. Mbeya, Tanzania
  - c. Lubango, Angola
  - d. None of the above
9. Which of the following is represented by a lettering style?
  - a. Ocean
  - b. Continent
  - c. Country
  - d. All of the above
10. What do the solid black lines that run horizontally across the map represent?
  - a. Longitude
  - b. Latitude
  - c. International Boundaries
  - d. Continental Boundaries
11. The Atlas Mountains are located near what coast?
  - a. Southeastern
  - b. Southwestern
  - c. Northeastern
  - d. Northwestern
12. The Nile River flows into which sea?
  - a. Lake Victoria
  - b. Mediterranean Sea
  - c. The Red Sea
  - d. The Black Sea
13. Which of the following capitals is on the Gulf of Guinea?
  - a. Malabo, Equatorial Guinea
  - b. Lagos, Nigeria
  - c. Douala, Cameroon
  - d. All of the above
14. Which of the following are north of the Tropic of Capricorn?
  - a. Port Elizabeth, South Africa
  - b. The capital of Botswana
  - c. The Gulf of Aden
  - d. 35 degrees south
15. Which country is the largest by area?
  - a. Algeria
  - b. Sudan
  - c. South Africa
  - d. Mali

# Travis Farm Sonnet, Texas Establish 1879



I43

I72 (Center City 10 Miles)

## LEGEND

Farm Boundary



Animal Pen



Dirt Road



Corn Field



Highway



Apple Orchard



River



Peach Orchard



Green House



Farm House



Grain Silo



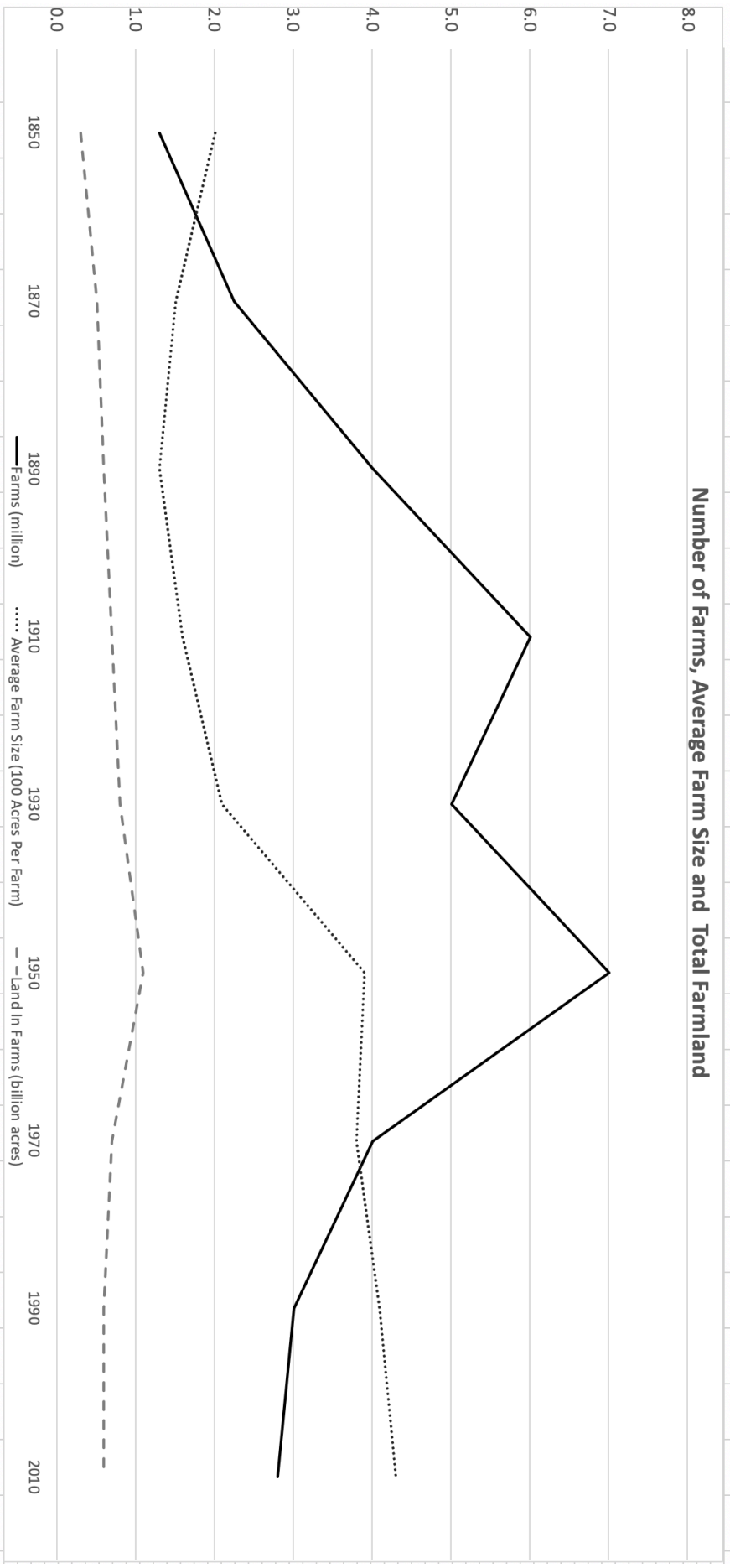
Barn



## Travis Farm Map

16. How many grain silos tanks are indicated on the map?
- 1
  - 2
  - 3
  - 4
17. What is the scale of the map?
- 1 inch equals  $\frac{1}{2}$  mile
  - 1 inch equals 1 mile
  - 1 inch equals 2 miles
  - Not indicated
18. Where on the farm is the loafing pen located?
- East
  - West
  - North
  - South
19. What does the double black line indicate?
- Highway
  - Farm Boundary
  - River
  - Dirt Road
20. How far is it to Center City from the farm?
- 2 miles
  - 5 miles
  - 10 miles
  - 20 miles
21. What kind of animal is not kept on the farm?
- Pigs
  - Goats
  - Sheep
  - Cows
22. What direction would you head from Center City to get to the farm?
- Southeast
  - Southwest
  - Northeast
  - Northwest
23. Which is located immediately north of the sheep pen?
- Water Tank
  - Farm House
  - Barn
  - Corn Field
24. How many types of orchards are shown on the map?
- 1
  - 2
  - 3
  - 4
25. What is grown in the greenhouse?
- Herbs
  - Flowers
  - Corn
  - Not indicated
- TRUE/FALSE**
26. The Travis Farm has apple and peach orchards.
27. The farm was established in 1789.
28. The farm grows three types of crops.
29. The dirt roads inside the farm crosses the Slow River twice.
30. The farm is north of I43.

Number of Farms, Average Farm Size and Total Farmland



## Number of Farms, Average Farm Size and Total Farmland

31. What does the y axis represent?
- Total number farms
  - Average farm size
  - Total land used in farms
  - All of the above
32. What does the solid black line represent?
- Total number of farms
  - Average farm size
  - Total land used in farms
  - The year
33. In what year did the number of acres used for farming peak?
- 2010
  - 1950
  - 1910
  - 1850
34. What year saw the total number of farms decrease the most when compared to the previous data point?
- 1930
  - 1970
  - 1990
  - 2010
35. What span of time is represented on the y axis?
- 160 years
  - 100 years
  - 150 years
  - None of the above
36. What year saw the highest average size of farms?
- 1930
  - 1970
  - 1990
  - 2010
37. Which category is measured in billions?
- Total number farms
  - Average farm size
  - Total land in farms
  - All of the above
38. Since 1930, which category had the steadiest increase?
- Total number farms
  - Average farm size
  - Total land used in farms
  - Impossible to determine
39. How many data points are displayed on the x axis?
- 9
  - 7
  - 3
  - 160
40. How many farms were there in 1870?
- About 2 million
  - About 2.5 million
  - About 2.75 million
  - About 3 million
- TRUE/FALSE**
41. Average farm size and number of farms always move in the opposite direction.
42. From the year the graph begins to where it ends, every category saw an increase.
43. Average farm size increased every year since 1910.
44. The peak in all three categories was in 1950.
45. Land in farms has changed the least over the time covered in the graph.



**THIS PAGE IS INTENTIONALLY BLANK.**

## Europe: Precipitation, Climate and Land Use Maps

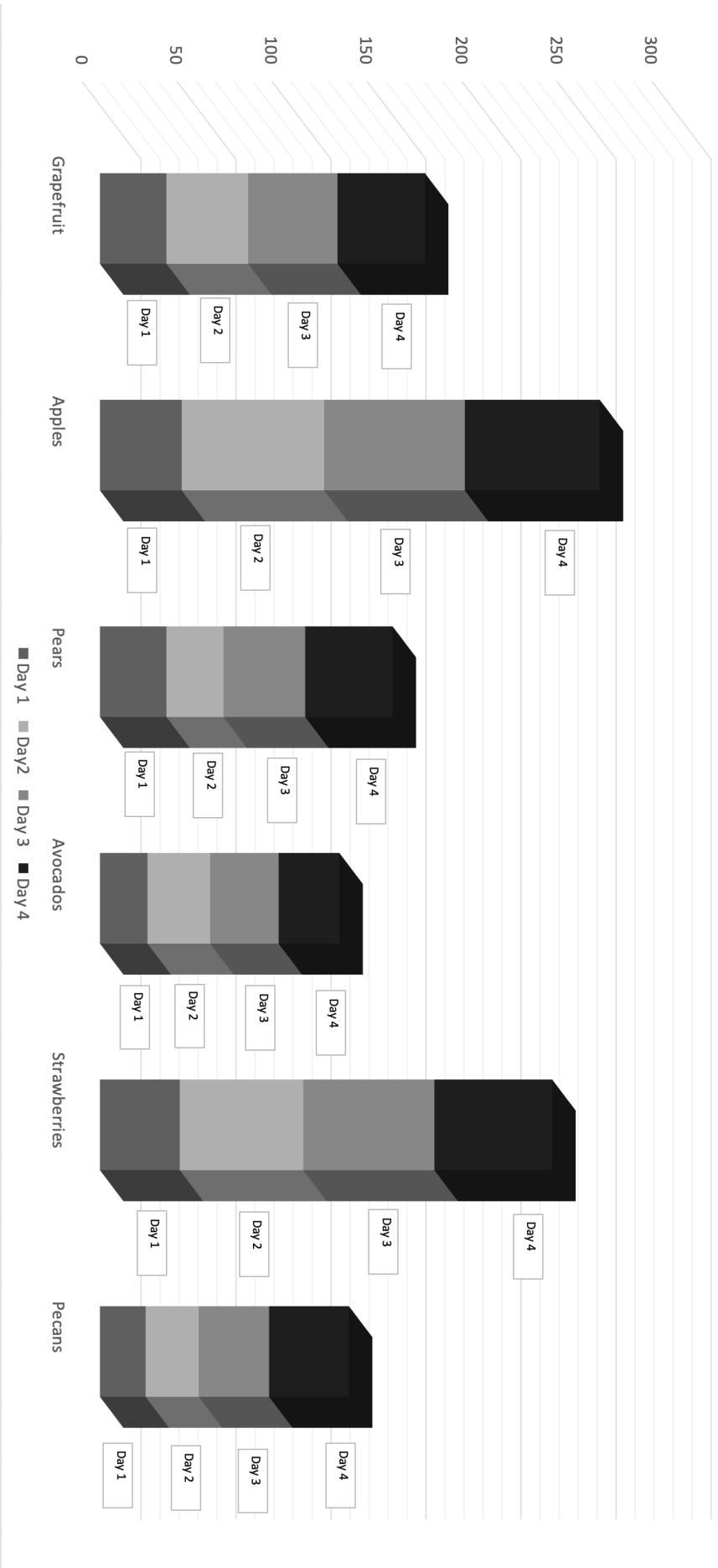
46. Which of the following is not a widespread economic use of land in Spain?
- Urban
  - Commercial farming
  - Subsistence farming
  - Ranching or herding
47. Which of the following countries has large areas of no widespread economic use?
- Sweden
  - Russia
  - Norway
  - Greece
48. Which of the following climate types can be found north of the Arctic Circle?
- Mediterranean
  - Marine
  - Cool Summer
  - None of the above
49. What is the scale of the Land Use Map?
- One inch equals 470 miles
  - One inch equals 565 miles
  - One inch equals 358 miles
  - Not indicated
50. What city can be found at 50.4501° N, 30.5234° E?
- Berlin, Germany
  - Kiev, Ukraine
  - Madrid, Spain
  - Rome, Italy
51. The Atlantic Ocean is off the west coast of which of the following countries?
- France
  - Hungary
  - Turkey
  - Greece

52. Which of the following countries has areas that receive only 10 to 20 inches of rain per year?
- Germany
  - Netherlands
  - Austria
  - Finland
53. Subsistence farming occurs in what area of Iceland?
- North
  - South
  - East
  - West
54. Steppe can mainly be found in what area of Europe?
- Southeast
  - Southwest
  - Northeast
  - Northwest

### TRUE/FALSE

55. Seven types of economic land use are indicated on the Climate map.
56. All tundra is located north of the Arctic Circle.
57. The climate type in Belgium is Marine.
58. Milan is located in an area of urban land use.
59. Steppe climates can be found in Spain.
60. Precipitation amounts in Spain vary from 10 to 20 inches per year to over 80 per year.

# Farmer's Market Sales In Pounds



## Farmer's Market Sales in Pounds

61. What does the darkest solid on the column represent?
- Pounds
  - Dollars
  - Day 2
  - Day 4
62. What period of time is represented on the graph?
- 4 days
  - 1 weekend
  - 4 weekends
  - Not indicated
63. Which item had the highest total sales for the time represented on the graph?
- Grapefruit
  - Apples
  - Strawberries
  - Pecans
64. What day had the lowest total of strawberries sold?
- Day 1
  - Day 2
  - Day 3
  - Day 4
65. Which item had the lowest sales on Day 2?
- Pears
  - Avocados
  - Strawberries
  - Pecans
66. Which item showed an increase in sale for every day listed?
- Grapefruit
  - Avocados
  - Strawberries
  - Pecans

67. What do the numbers on the y axis represent?
- Day
  - Sales in dollars
  - Sales in pounds
  - Daily visitors

68. How many items had total sales over 150?
- 0
  - 2
  - 3
  - 4

69. On how many days did pears outsell avocados?
- 0
  - 2
  - 3
  - 4

70. How many pounds of pecans were sold on Day 2?
- About 20
  - About 30
  - About 40
  - About 50

### TRUE/FALSE

71. All items had the least number of sales on day 1.
72. Strawberries sold more than grapefruits on every day.
73. Apples had the highest single day sales.
74. Avocados had the smallest day 4 sales.
75. The graph shows that apples made the most money during the time indicated on the graph.



**University Interscholastic League**  
**A+ Maps/Graphs/Charts Contest • 2019-2020**  
**5/6 Fall District**  
**Answer Key**

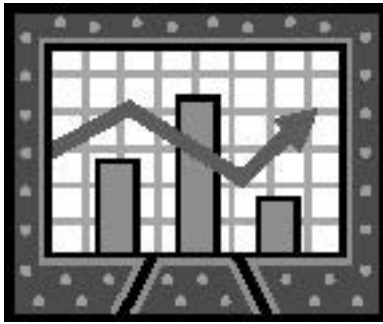
1. C	26. F	51. A
2. D	27. F	52. D
3. B	28. F	53. A
4. A	29. T	54. A
5. D	30. T	55. F
6. A	31. D	56. F
7. B	32. A	57. T
8. A	33. B	58. T
9. D	34. B	59. T
10. B	35. D	60. F
11. D	36. D	61. D
12. B	37. C	62. A
13. A	38. B	63. B
14. C	39. A	64. A
15. A	40. B	65. D
16. B	41. F	66. D
17. D	42. T	67. C
18. B	43. F	68. C
19. C	44. F	69. C
20. C	45. T	70. B
21. D	46. C	71. F
22. C	47. C	72. T
23. D	48. B	73. T
24. B	49. D	74. T
25. D	50. B	75. F

**FALL/WINTER DISTRICT 2019-2020**

**A+ ACADEMICS**



University Interscholastic League



# Maps, Graphs & Charts

grades 7 & 8

**DO NOT OPEN TEST  
UNTIL TOLD TO DO SO**

**THIS PAGE IS INTENTIONALLY BLANK.**

## Asia

- The Iranian city of Tabriz is how far from the capital of the country?
  - About 325 miles
  - About 400 miles
  - About 525 miles
  - About 600 miles
- Major oil fields are in what area of Saudi Arabia?
  - North
  - South
  - East
  - West
- The Northern Mariana Islands are a territory of what country?
  - India
  - Russia
  - Japan
  - United States
- The deepest lake on the continent is located in what country?
  - China
  - Russia
  - Kazakhstan
  - Indonesia
- Which of the following countries has a border that spans two continents?
  - Russia
  - Azerbaijan
  - Kazakhstan
  - All of the above
- How much of the continent receives 20 inches or less precipitation per year?
  - About one tenth
  - About twenty-five percent
  - About one third
  - More than half
- What is the main land cover type on the North China Plain?
  - Cropland
  - Grassland
  - Semi-desert & desert
  - Broadleaf forest
- Which of the following countries has the highest annual birth rate?
  - India
  - China
  - Laos
  - Turkey
- What do the red lines on the Elevation map show?
  - Elevation differences
  - Continental boundaries
  - Rivers
  - International boundaries
- Which city has the highest population?
  - Uliastay, Mongolia
  - Chita, Russia
  - Kanpur, India
  - Changji, China
- What is the climate type in and around the Russian city of Tiksi?
  - Desert
  - Hot summer
  - Cool Summer
  - Tundra
- Which of the following has the lowest population growth?
  - China
  - India
  - Laos
  - The World
- What natural resource can be found in Pakistan?
  - Oil
  - Gold
  - Coal
  - Zinc
- What country capital is located on the banks of the Red River?
  - Beijing, China
  - Hanoi, Vietnam
  - Moscow, Russia
  - None
- A portion of the largest island on the continent is part of what country?
  - Malaysia
  - Russia
  - India
  - Japan



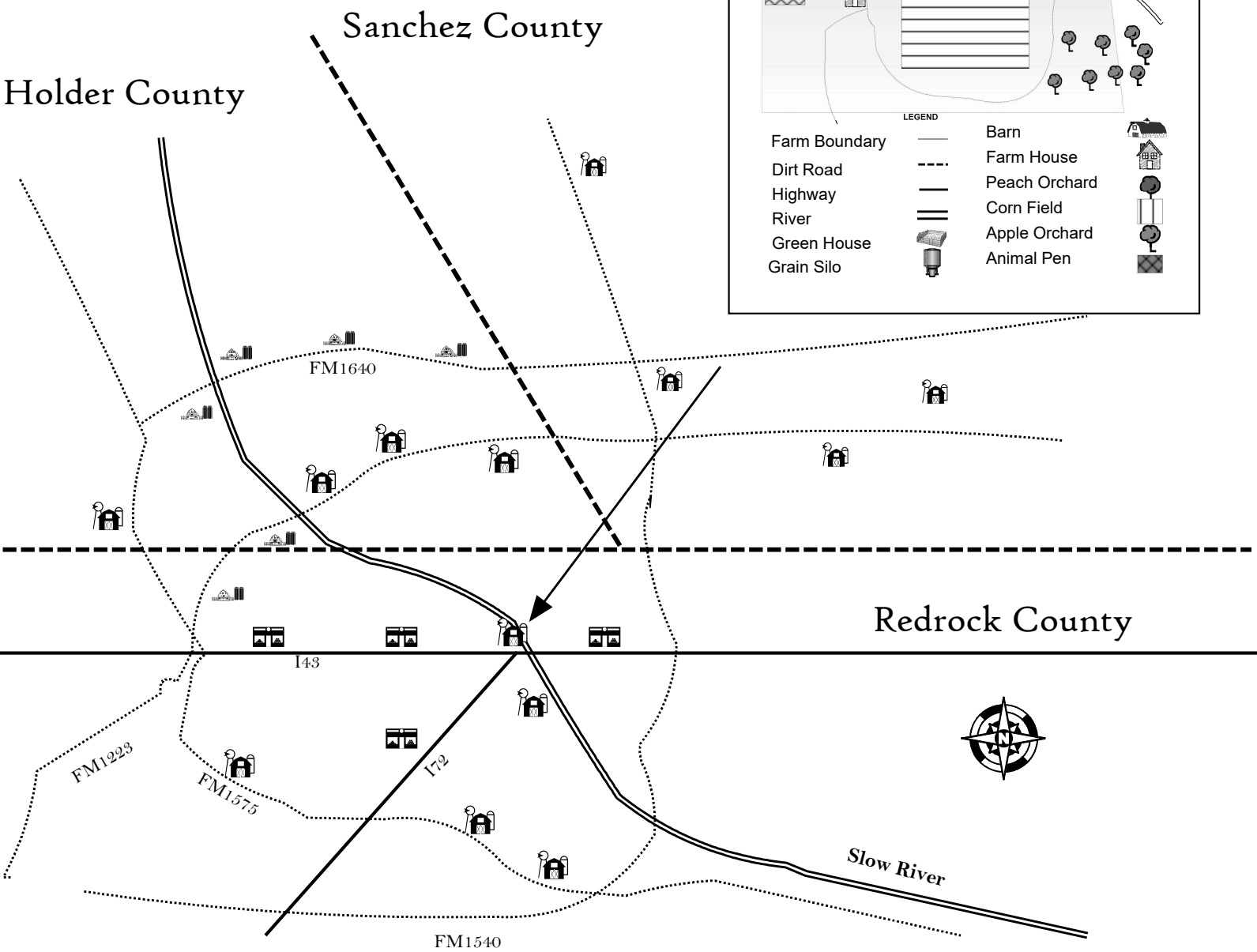
# Tri-County Farm/Ranch/Fruit Stand Map



Travis Farm  
Sonnet, Texas  
Establish 1879

**LEGEND**

Farm Boundary	—	Barn	
Dirt Road	- - -	Farm House	
Highway	==	Peach Orchard	
River	===	Corn Field	
Green House		Apple Orchard	
Grain Silo		Animal Pen	



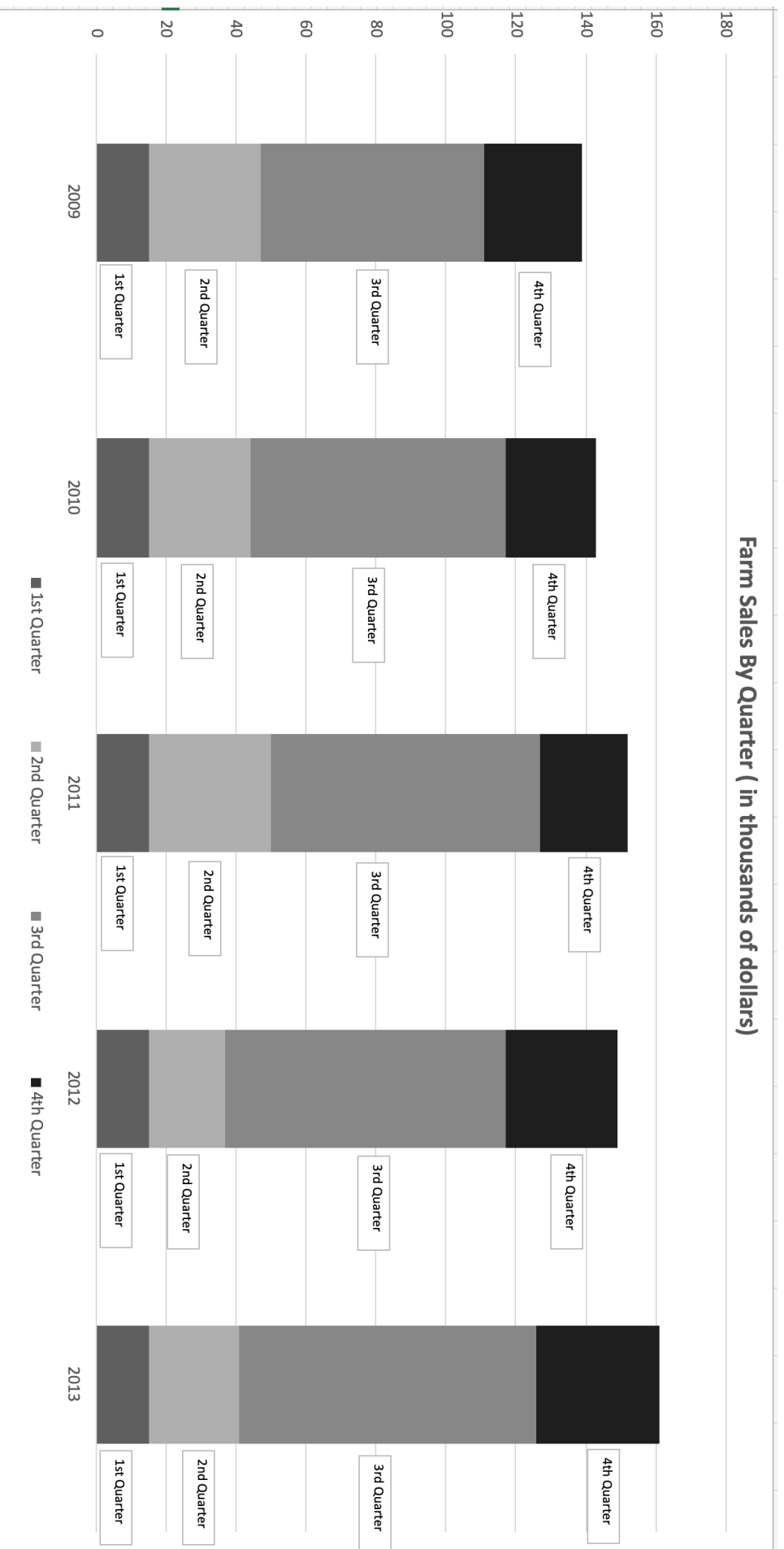
**Legend**

County Line	- - - - -	Farm	
Highway	==	Fruit Stand	
Farm Road	.....	Ranch	
River	===		

**Tri-County  
Farm/Ranch/Fruit Stand  
Map**

16. How many counties are shown on the map?
- 2
  - 3
  - 4
  - 5
17. One inch equals how many miles?
- 1
  - 5
  - 10
  - Scale not indicated
18. What does the dotted line on the main map indicate?
- Highway
  - Farm Road
  - River
  - Farm Boundary
19. How many ranches are located in the southernmost county?
- 0
  - 1
  - 2
  - 3
20. The insert shows detail for what?
- A farm in Sanchez County
  - A ranch in Redrock County
  - A fruit stand in Holder County
  - None of the above
21. What type of crop is grown on Travis Farm?
- Corn
  - Wheat
  - Barley
  - Cotton
22. Which county has the most farms located in it?
- Redrock
  - Holder
  - Travis
  - Sanchez
23. How many counties have fruit stands located in them?
- 0
  - 1
  - 2
  - 3
24. The open grazing area is located on what portion of Travis Farm?
- West
  - South
  - East
  - North
25. How many animal pens are shown on the insert map?
- 0
  - 1
  - 2
  - 3
- TRUE/FALSE**
26. All fruit stands are located on highways.
27. FM 1640 runs through all counties shown on the map.
28. The Slow River runs through Travis Farm.
29. FM 1640 is south of both the highways shown on the map.
30. The double line on the main map and the insert both indicate highways.

### Farm Sales By Quarter (in thousands of dollars)



## Farm Sales By Quarter

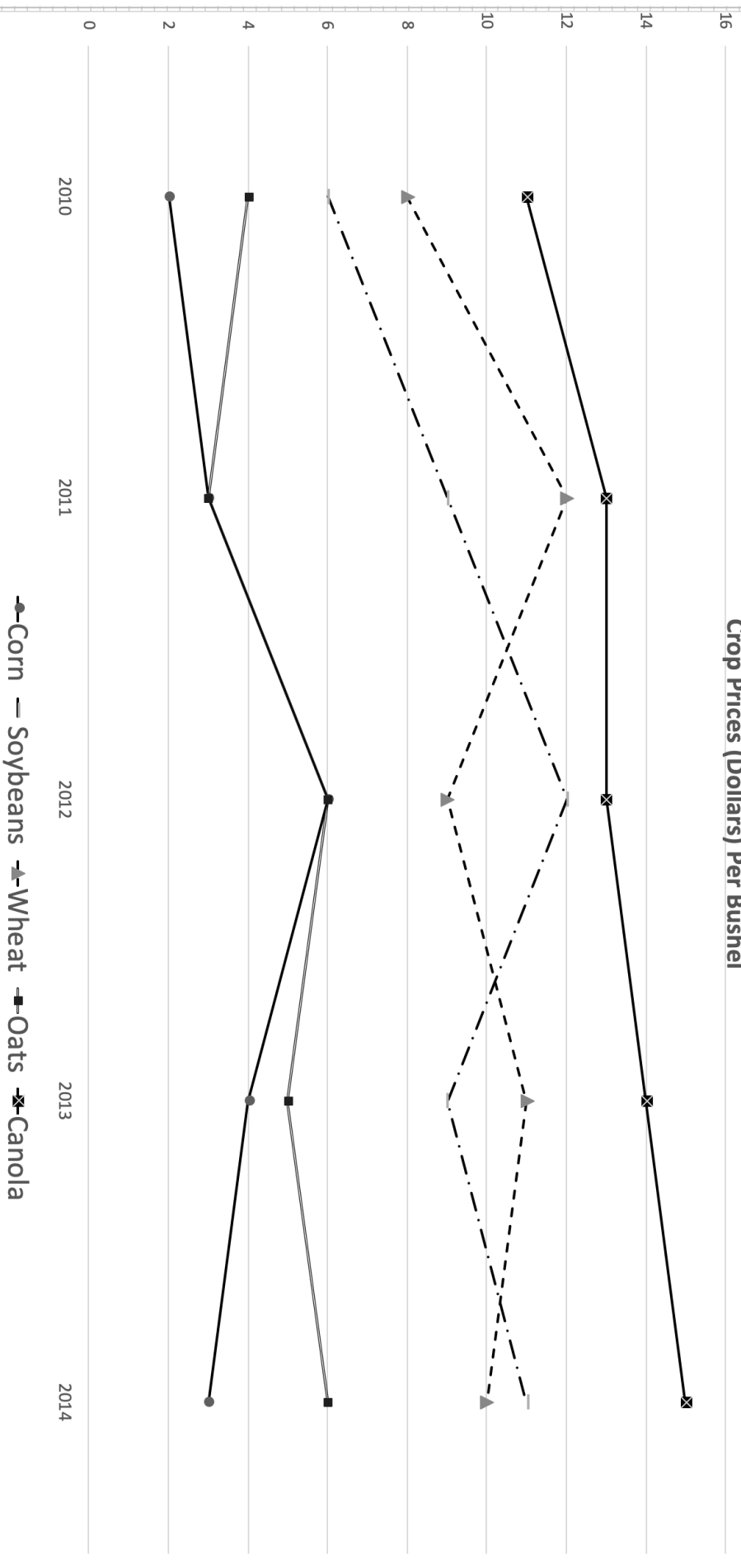
31. What do the numbers on the x axis represent?
- Sales by thousands of dollars
  - The quarter
  - The year
  - None of the above
32. What year had the highest amount of sales?
- 2010
  - 2011
  - 2012
  - 2013
33. What does the darkest portion of the columns represent?
- 2009
  - 2013
  - 1<sup>st</sup> quarter
  - 4<sup>th</sup> quarter
34. What year saw the most sales in the second quarter?
- 2010
  - 2011
  - 2012
  - 2013
35. How many quarters had a decrease in sales every year?
- 0
  - 1
  - 2
  - 3
36. How many quarters had their highest sales in the last year represented on the chart?
- 0
  - 1
  - 2
  - 3
37. What was the total amount of sales (in dollars) in 2010?
- \$145
  - \$1,450
  - \$14,500
  - \$145,000
38. In how many quarters were there more sales in 2009 than 2012?
- 0
  - 1
  - 2
  - 3
39. Which quarter of 2013 had the greatest increase from the same quarter of 2012?
- 1st
  - 2nd
  - 3rd
  - 4th
40. How many times did sales in the first quarter surpass \$2,000?
- 0
  - 1
  - 4
  - 5
- TRUE/FALSE**
41. Total sales have gone up every year.
42. Sales are highest in the third quarter of every year.
43. Every quarter in 2013 saw sales of at least \$20,000.
44. Five years are represented on the graph.
45. Third quarter sales accounted for at least half of total sales for every year.

**THIS PAGE IS INTENTIONALLY BLANK.**

## Australia and Oceania

46. What island is separated from Australia by the Bass Strait?
- Tasmania
  - Melville Island
  - New Zealand
  - Timor
47. The Nullarbor Plain is located in what area of Australia?
- North
  - South
  - East
  - West
48. Which indigenous people group is native to the island of New Guinea?
- Melanesians
  - Polynesians
  - Micronesians
  - Aborigines
49. What Australian city can be found at 38° S, 144 E?
- Albany
  - Ballarat
  - Port Hedland
  - Townsville
50. Which is the largest ethnic population in New Zealand?
- European
  - Maori
  - Asian
  - Other Polynesian
51. The Cook Islands are part of what country?
- Australia
  - Vanuatu
  - New Zealand
  - United States
52. What does the yellow line around the Northern Mariana Islands indicate?
- Official international boundaries
  - Cultural differentiation
  - A disputed boundary
  - Island groups with the same government
53. The east coast of Australia receives which of the following ranges of precipitation per year?
- Over 80 inches
  - 40 to 80 inches
  - 20 to 40 inches
  - None of the above
54. Which of the following is east of the International Date Line?
- China
  - The Hawaiian Islands
  - Kiribati
  - None of the above
55. What are the white dots on the Political Relief Map?
- Continental Boundary
  - International Boundary
  - International Date Line
  - The Equator
56. Which of the following rivers is the longest?
- Darling
  - Murray
  - Lachlan
  - Finders
57. In New Zealand, what are large sheep ranches called?
- Stations
  - Sheep Farms
  - Sheep Pens
  - Outbacks
58. The Cook Strait runs next to what country capital?
- Wellington, New Zealand
  - Canberra, Australia
  - Jakarta, Indonesia
  - Blenheim, New Zealand
59. The Great Barrier Reef is located off what Australian Coast?
- Southeast
  - Southwest
  - Northeast
  - Northwest
60. Which is the capital of the state of Queensland?
- Perth
  - Brisbane
  - Gold Coast
  - Sydney

### Crop Prices (Dollars) Per Bushel



● Corn — Soybeans ▲ Wheat ■ Oats ✕ Canola

## Crop Prices (Dollars) Per Bushel

61. What does the line with the square with an "x" represent?
- The year 2010
  - The year 2011
  - Oats
  - Canola
62. How many different crops are represented?
- 4
  - 5
  - 10
  - 15
63. Which crop averaged the highest price over the time covered in the graph?
- Canola
  - Corn
  - Soybeans
  - Wheat
64. How many crops had a lower price in 2011 when compared to 2010?
- 0
  - 1
  - 2
  - 3
65. How many times did different crops end up with the same price in a single year?
- 0
  - 1
  - 2
  - 3
66. Which crop had the biggest price gain in a single year?
- Canola
  - Corn
  - Soybeans
  - Wheat

67. How many crops rose in price every year?
- 0
  - 1
  - 2
  - 3
68. How many times did the price of wheat drop when compared to the previous year?
- 0
  - 1
  - 2
  - 3
69. The price is indicated in dollars per what?
- Pound
  - 100 pounds
  - Kilo
  - None of the above
70. How many crops had their highest price in 2010?
- 0
  - 1
  - 2
  - 3

### TRUE/FALSE

71. The graph does not indicate the profit made from each crop.
72. Corn either had the lowest price or tied for the lowest price every year.
73. The price of soybeans only declined twice.
74. All crops had their lowest price in the first year shown on the graph.
75. The highest price any crop reached in any year was \$16 per bushel.





**University Interscholastic League**  
**A+ Maps/Graphs/Charts Contest • 2019-2020**  
**7/8 Fall District**  
**Answer Key**


<b>1. A</b>	<b>26. T</b>	<b>51. C</b>
<b>2. C</b>	<b>27. F</b>	<b>52. D</b>
<b>3. D</b>	<b>28. T</b>	<b>53. B</b>
<b>4. B</b>	<b>29. F</b>	<b>54. B</b>
<b>5. D</b>	<b>30. F</b>	<b>55. A</b>
<b>6. D</b>	<b>31. C</b>	<b>56. B</b>
<b>7. A</b>	<b>32. D</b>	<b>57. A</b>
<b>8. C</b>	<b>33. D</b>	<b>58. A</b>
<b>9. D</b>	<b>34. B</b>	<b>59. C</b>
<b>10. C</b>	<b>35. A</b>	<b>60. B</b>
<b>11. D</b>	<b>36. D</b>	<b>61. D</b>
<b>12. A</b>	<b>37. D</b>	<b>62. B</b>
<b>13. A</b>	<b>38. B</b>	<b>63. A</b>
<b>14. B</b>	<b>39. C</b>	<b>64. B</b>
<b>15. A</b>	<b>40. D</b>	<b>65. C</b>
<b>16. B</b>	<b>41. F</b>	<b>66. D</b>
<b>17. D</b>	<b>42. T</b>	<b>67. A</b>
<b>18. B</b>	<b>43. T</b>	<b>68. C</b>
<b>19. B</b>	<b>44. T</b>	<b>69. D</b>
<b>20. D</b>	<b>45. T</b>	<b>70. A</b>
<b>21. A</b>	<b>46. A</b>	<b>71. T</b>
<b>22. A</b>	<b>47. B</b>	<b>72. T</b>
<b>23. B</b>	<b>48. A</b>	<b>73. F</b>
<b>24. D</b>	<b>49. B</b>	<b>74. F</b>
<b>25. D</b>	<b>50. A</b>	<b>75. F</b>

**SPRING DISTRICT 2019-2020**

**A+ ACADEMICS**



University Interscholastic League



# Maps, Graphs & Charts

grades 5 & 6

**DO NOT OPEN TEST  
UNTIL TOLD TO DO SO**

**THIS PAGE IS INTENTIONALLY BLANK.**

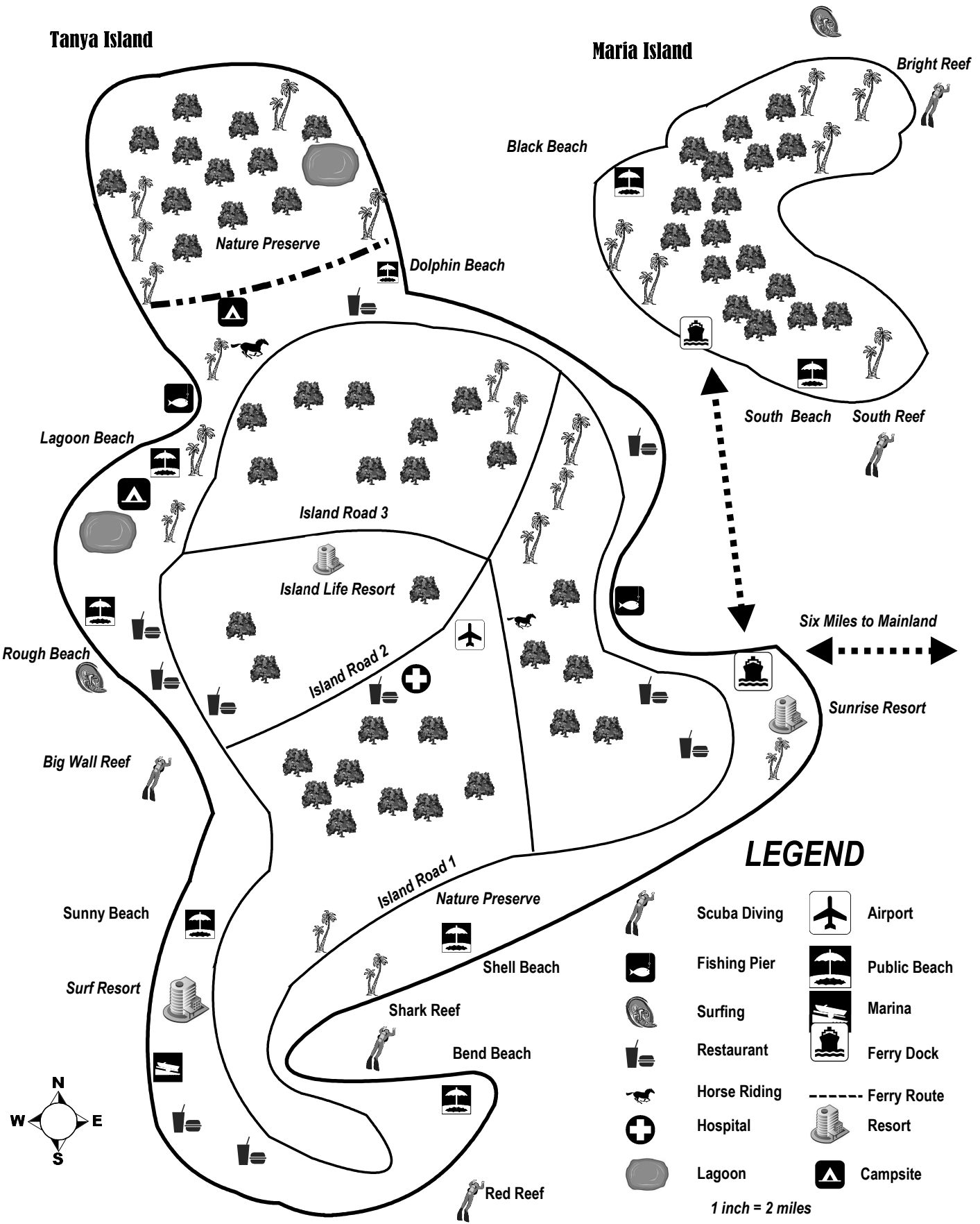
## South America Political Relief Map

- How many country capitals are located on the shores of Rio de la Plata?
  - 0
  - 1
  - 2
  - 3
- What city of over 1,000,000 people can be found at about 30° S?
  - Santa Maria, Brazil
  - Porto Alegre, Brazil
  - La Serena, Chile
  - Medellin, Columbia
- Why are the countries in the northwest corner of the map, like Belize and El Salvador, all filled in with the same color?
  - They have a single governmental body
  - They belong to a different continent
  - They have the same land cover
  - None of the above
- The Parana River forms the border between Paraguay and what other country?
  - Argentina
  - Peru
  - Guyana
  - Ecuador
- How far is it from the city of Trujillo to the country's capital?
  - About 200 miles
  - About 300 miles
  - About 400 miles
  - About 500 miles
- Juan Fernandez Island is a territory of what country?
  - Brazil
  - Venezuela
  - Peru
  - Chile
- The Tropic of Cancer crosses which of the following countries?
  - Argentina
  - Ecuador
  - Suriname
  - None of the above
- Which of the following cities is the largest?
  - La Serena, Chile
  - Cusco, Peru
  - Salvador, Brazil
  - Salto, Uruguay
- The Andes Mountains are in what part of the continent?
  - North
  - South
  - East
  - West
- What does a double line across a river represent?
  - Waterfalls
  - Dams
  - Canals
  - None of the above
- The Strait of Magellan runs through which of the following countries?
  - Brazil
  - Colombia
  - Bolivia
  - Chile
- The water from Lake Titicaca flows down a river into what other body of water?
  - Scotia Sea
  - Atlantic Ocean
  - Lake Poopo
  - Patos Lagoon
- Which countries capital is closest to the equator?
  - Suriname
  - Bolivia
  - Brazil
  - Uruguay
- Which of the following rivers is not connected to the Amazon River?
  - Negro River
  - Purus River
  - Salado River
  - None of the above
- How many cities of over 1,000,000 are in Guyana?
  - 0
  - 1
  - 2
  - 3

# Two Sisters Islands

Tanya Island

Maria Island



## LEGEND

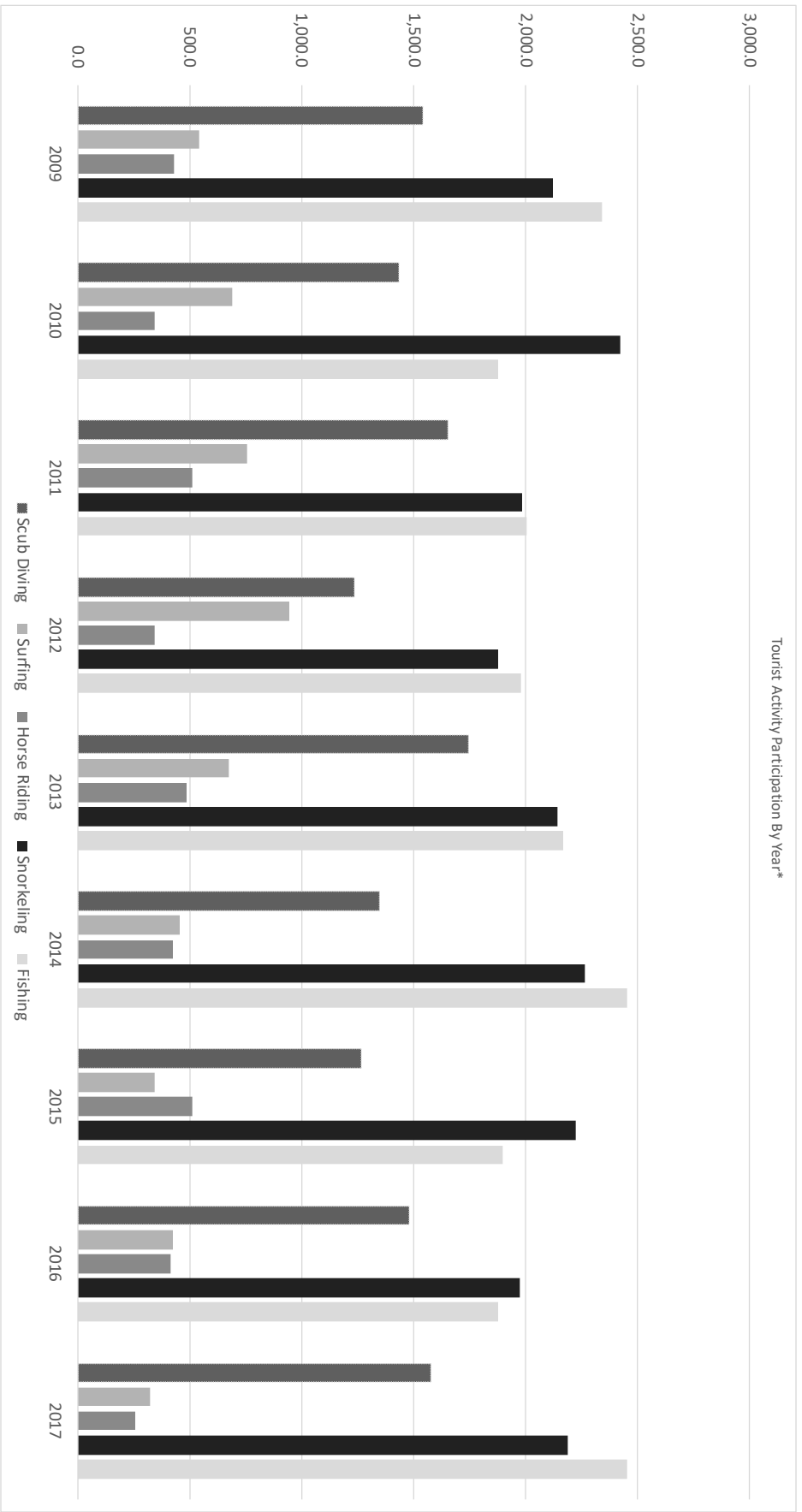
- |  |              |  |              |
|--|--------------|--|--------------|
|  | Scuba Diving |  | Airport      |
|  | Fishing Pier |  | Public Beach |
|  | Surfing      |  | Marina       |
|  | Restaurant   |  | Ferry Dock   |
|  | Horse Riding |  | Ferry Route  |
|  | Hospital     |  | Resort       |
|  | Lagoon       |  | Campsite     |

1 inch = 2 miles

## Two Sister Islands

16. How many resorts are on Maria Island?
- 0
  - 1
  - 2
  - 3
17. How many inches from the ferry dock on Tanya Island would the mainland be if it were shown on the map?
- 1
  - 2
  - 3
  - 4
18. Red Reef is located off what area of Tanya Island?
- East
  - West
  - North
  - South
19. What does the dotted line indicate?
- Island Road
  - Ferry Route
  - Island Boundary
  - None of the above
20. Which beach is located next to a campsite?
- Lagoon Beach
  - South Beach
  - Sunny Beach
  - Bend Beach
21. What type of recreation can be found near South Beach?
- Surfing
  - Horse Riding
  - Scuba Diving
  - None of the above
22. What direction does the ferry go to take passengers from Maria Island to Tanya Island?
- East
  - West
  - North
  - South
23. Going by the main roads show on the map, which resort has the shortest drive to go horse riding?
- Surf Resort
  - Island Life Resort
  - Sunrise Resort
  - Pebble Beach Resort
24. How many surfing areas are shown on the map?
- 1
  - 2
  - 3
  - 4
25. How long is Island Road 3?
- About 5 miles
  - About 9 miles
  - About 14 miles
  - About 20 miles
- TRUE/FALSE**
26. The ferry goes directly from Maria Island to the mainland.
27. All of the resorts are accessible from Island Road 1.
28. All diving areas are associated with reefs.
29. The mainland is six miles west of Tanya Island.
30. The airport is less than two miles southwest of the hospital.

Tourist Activity Participation By Year\*\*



\*\*Numbers based on participation in post visit survey. About half of all surveys sent out were returned.

## Tourist Activity Participation By Year

31. Years are represented on what axis?
- X
  - Y
  - Both
  - Neither
32. What does the darkest bar represent?
- 2013
  - 2017
  - Surfing
  - Snorkeling
33. Which of the following years saw the highest number of tourists go fishing?
- 2014
  - 2013
  - 2012
  - 2011
34. How many categories saw increases in participation in every year?
- 0
  - 1
  - 2
  - 3
35. What year saw the biggest jump in participation in surfing from the previous year?
- 2014
  - 2013
  - 2012
  - 2011
36. What year had the highest combined numbers?
- 2013
  - 2014
  - 2015
  - 2016
37. In how many years were there more tourist riding horses than surfing?
- 0
  - 1
  - 2
  - 3
38. How many years of data are displayed on the graph?
- 7
  - 8
  - 9
  - 10
39. How many activities had above 1,500 participants in every year?
- 1
  - 2
  - 3
  - 4
40. Which of the following had the highest combined participation across all years show on the graph?
- Scuba Diving
  - Surfing
  - Horse Riding
  - Fishing

### TRUE/FALSE

41. The graph displays information for all tourist during that time period.
42. Either fishing or snorkeling saw the highest amount of participation every year.
43. 2011 had increases in participation from the previous year in every category.
44. Participation in fishing never dropped below 2,000 for the year.
45. Scuba diving was always the third most popular activity.

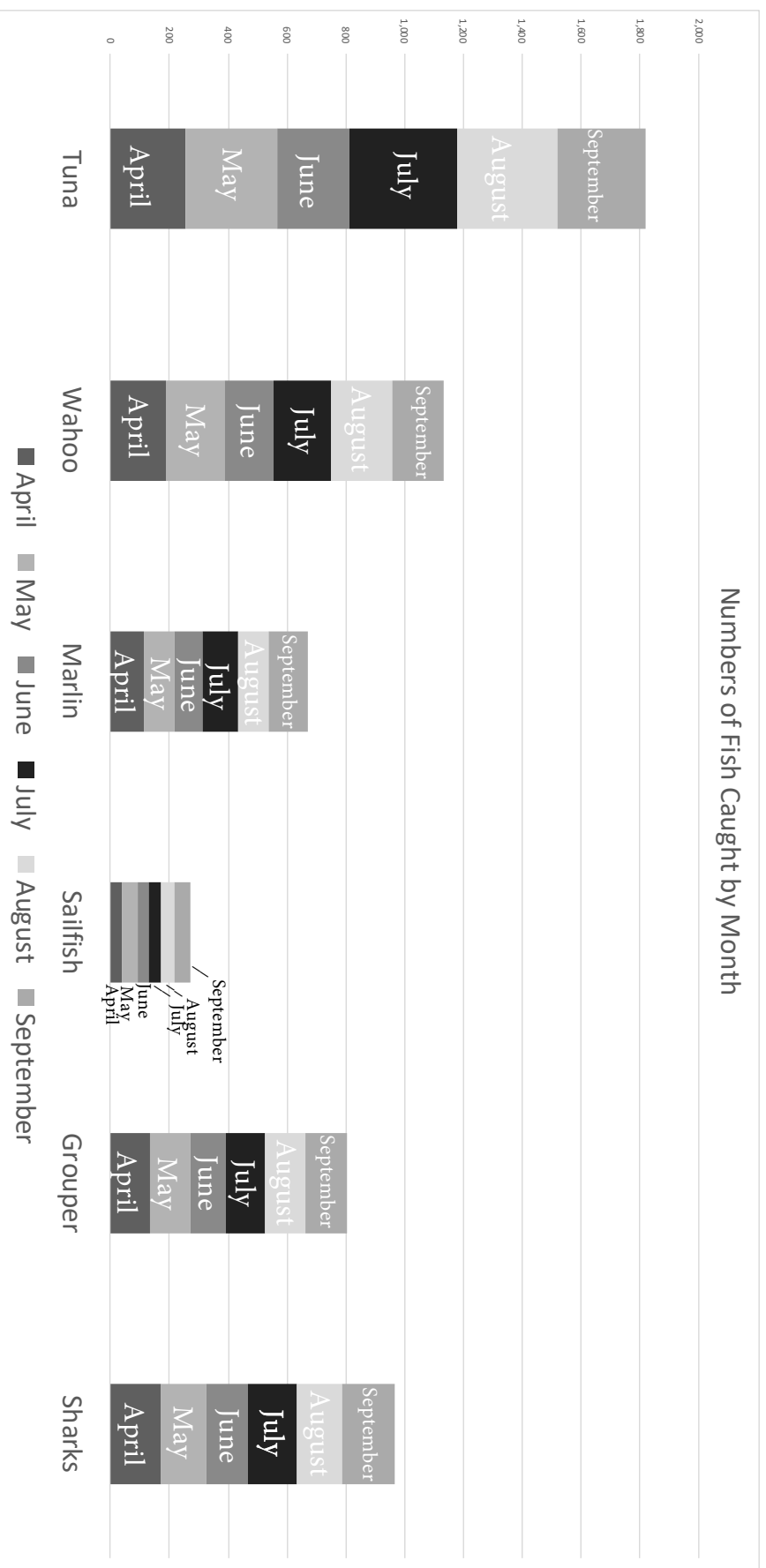


**THIS PAGE IS INTENTIONALLY BLANK.**

## Antarctica Land Cover Map and The Arctic Land Cover Map

46. What do the red dots on the Antarctica Land Cover Map indicate?
- Capitals
  - Continental Boundary
  - Research Stations
  - International Boundary
47. What is the vertical exaggeration of the cross section of the Antarctica Land Cover Map?
- 25 to 1
  - 31 to 1
  - 37 to 1
  - 42 to 1
48. What body of water separates Norway from the United Kingdom?
- Norwegian Sea
  - North Sea
  - Sea of Okhotsk
  - Kara Sea
49. How far is from the South Pole to Vostok Research Station?
- About 500 miles
  - About 650 miles
  - About 800 miles
  - About 950 miles
50. The Prime Meridian runs through which of the following?
- South Pole
  - North Pole
  - Both of the above
  - None of the above
51. The land cover type on Baffin Island is mostly of what type?
- Tundra
  - Glacier
  - Grassland
  - Cropland
52. What city can be found at 54° N, 113° W?
- Helsinki
  - Edmonton
  - Moscow
  - London
53. The Lena River flows through what country?
- Norway
  - Greenland
  - Canada
  - Russia
54. The Casey Research Station is run by what nation?
- Australia
  - Russia
  - United States
  - Canada
- TRUE/FALSE**
55. The land cover is more varied in the Arctic than in Antarctica.
56. Helsinki, Finland is just north of the Arctic Circle.
57. South Shetland Island is a territory of the United States.
58. The Syowa Research Station is owned by Japan.
59. Tundra can be found on the Scandinavian Peninsula.
60. The Antarctica Land Cover Map and The Arctic Land Cover Map have the same scale.

## Numbers of Fish Caught by Month



## Numbers of Fish Caught by Month

61. What does the Y axis indicate?
- Number of fish caught
  - The type of fish caught
  - The total pounds of fish caught
  - None of the above
62. In what month were the most sharks caught?
- June
  - July
  - August
  - September
63. Which of the following had the least total amount caught over the time shown in the graph?
- Wahoo
  - Marlin
  - Grouper
  - Sharks
64. In how many months were more wahoo caught than tuna?
- 0
  - 1
  - 2
  - 3
65. Which type of fish was caught the most in the month of June?
- Tuna
  - Wahoo
  - Marlin
  - Sailfish
66. Which of the following months had the highest numbers caught for all types combined?
- May
  - June
  - July
  - August
67. How many different years are represented on the graph?
- 1
  - 2
  - 3
  - 4
68. In how many months did grouper catches fall below 100?
- 0
  - 2
  - 3
  - 4
69. How many types of fish had total catches over 1,000 for all months combined?
- 0
  - 2
  - 3
  - 4
70. About how many wahoo were caught in May?
- About 100
  - About 200
  - About 300
  - About 400
- TRUE/FALSE**
71. In April more sharks than grouper were caught.
72. June had the fewest number of catches for all types of fish.
73. The darkest portion on all of the columns represent a single type of catch.
74. The highest number of sailfish were caught in September.
75. Each column represents one month.



**University Interscholastic League**  
**A+ Maps/Graphs/Charts Contest • 2019-2020**  
**5/6 Spring District**  
**Answer Key**


1. C	26. F	51. A
2. B	27. F	52. B
3. B	28. T	53. D
4. A	29. F	54. A
5. B	30. F	55. T
6. D	31. A	56. F
7. D	32. D	57. F
8. C	33. A	58. T
9. D	34. A	59. T
10. A	35. C	60. F
11. D	36. A	61. A
12. C	37. B	62. D
13. A	38. C	63. B
14. C	39. B	64. A
15. A	40. D	65. A
16. A	41. F	66. C
17. C	42. T	67. A
18. D	43. F	68. A
19. B	44. F	69. B
20. A	45. T	70. B
21. C	46. C	71. T
22. D	47. C	72. T
23. B	48. B	73. F
24. B	49. C	74. T
25. A	50. C	75. F

**SPRING DISTRICT 2019-2020**

**A+ ACADEMICS**



University Interscholastic League



# Maps, Graphs & Charts

grades 7 & 8

**DO NOT OPEN TEST  
UNTIL TOLD TO DO SO**

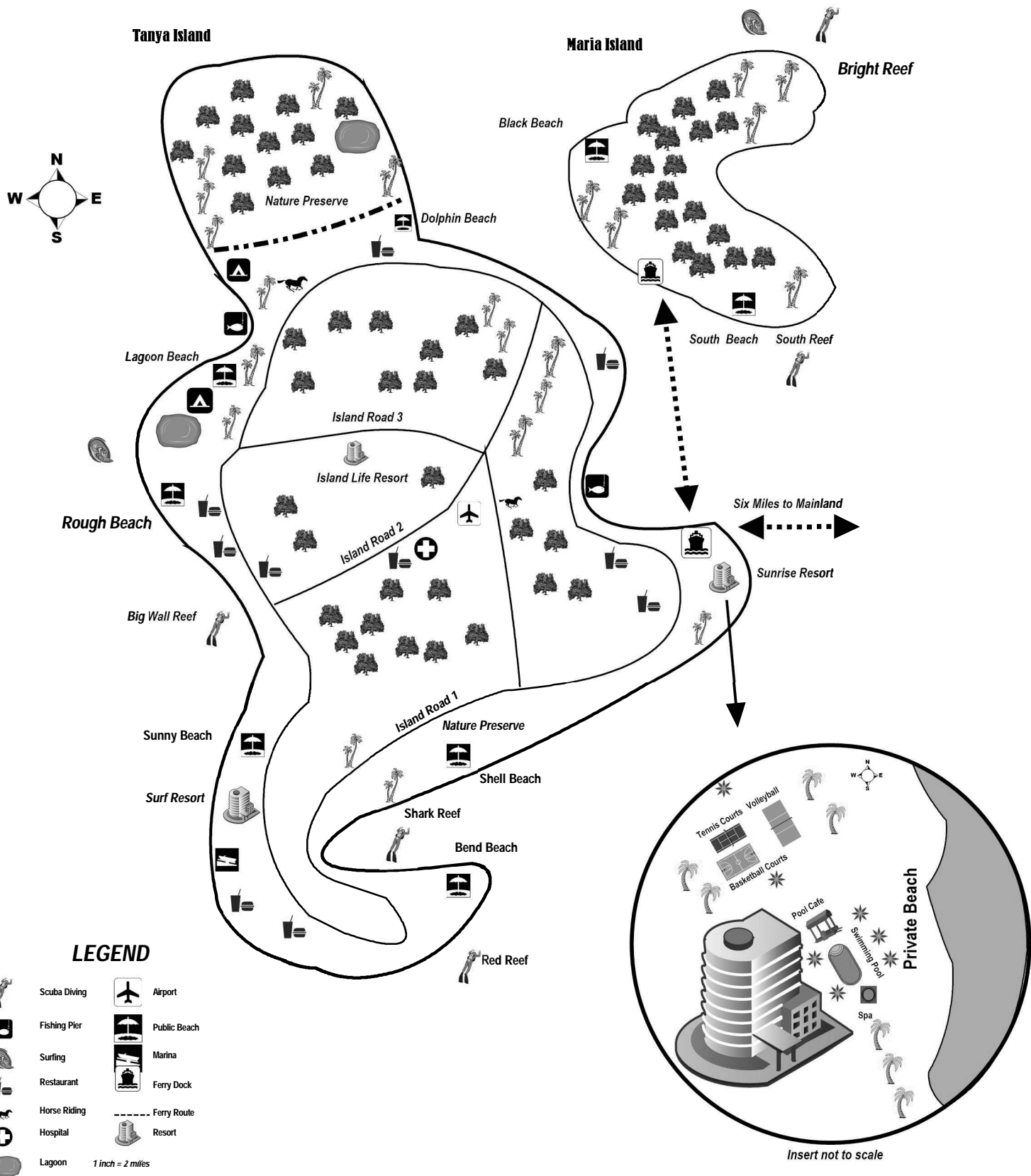
**THIS PAGE IS INTENTIONALLY BLANK.**

## Europe

1. What is the climate type in southern Bulgaria?
  - a. Cool Summer
  - b. Hot summer
  - c. Marine
  - d. Mediterranean
2. The continent's largest lake is located in what area of the continent?
  - a. Northwest
  - b. Southeast
  - c. Northeast
  - d. Southwest
3. Which of the following countries gets the highest percentage of their energy from hydroelectricity?
  - a. Norway
  - b. France
  - c. Finland
  - d. Spain
4. The Carpathian Mountains run through which of the following countries?
  - a. Sweden
  - b. Russia
  - c. Slovakia
  - d. France
5. The Labrador Current runs in what direction?
  - a. North to south
  - b. South to north
  - c. East to west
  - d. West to east
6. What do the blue and white lines on various maps indicate?
  - a. Water and sea floor
  - b. International boundaries
  - c. Rivers
  - d. Dams
7. How far is it from Gavle, Sweden to Kiruna, Sweden?
  - a. About 200 miles
  - b. About 300 miles
  - c. About 400 miles
  - d. About 500 miles
8. What is the highest elevation range in Latvia?
  - a. Below sea level
  - b. 0 to 500 feet
  - c. 1,000 feet to 2,000 feet
  - d. 5,000 feet to 10,000 feet
9. What is the main land cover type of Ireland?
  - a. Cropland
  - b. Grassland
  - c. Tundra
  - d. Needleleaf forest
10. What is the population range around the area of Milan, Italy?
  - a. 0 to 5 per square mile
  - b. 50 to 100 per square mile
  - c. 100 to 250 per square mile
  - d. Over 250 per square mile
11. Which of the following countries contains one of the largest urban areas in Europe?
  - a. Germany
  - b. Russia
  - c. Spain
  - d. Italy
12. Lake Geneva forms the border of which of the following countries?
  - a. Ukraine
  - b. Finland
  - c. Norway
  - d. France
13. What percentage of the Netherlands lies below sea level?
  - a. About 25 percent
  - b. About 50 percent
  - c. About 75 percent
  - d. Almost 100 percent
14. Which of the following countries has areas of ranching or herding?
  - a. Spain
  - b. Poland
  - c. United Kingdom
  - d. Denmark
15. The Don River flows into what body of water?
  - a. Barents Sea
  - b. Sea of Azov
  - c. North Sea
  - d. Lake Ladoga



# Two Sisters Islands



## LEGEND

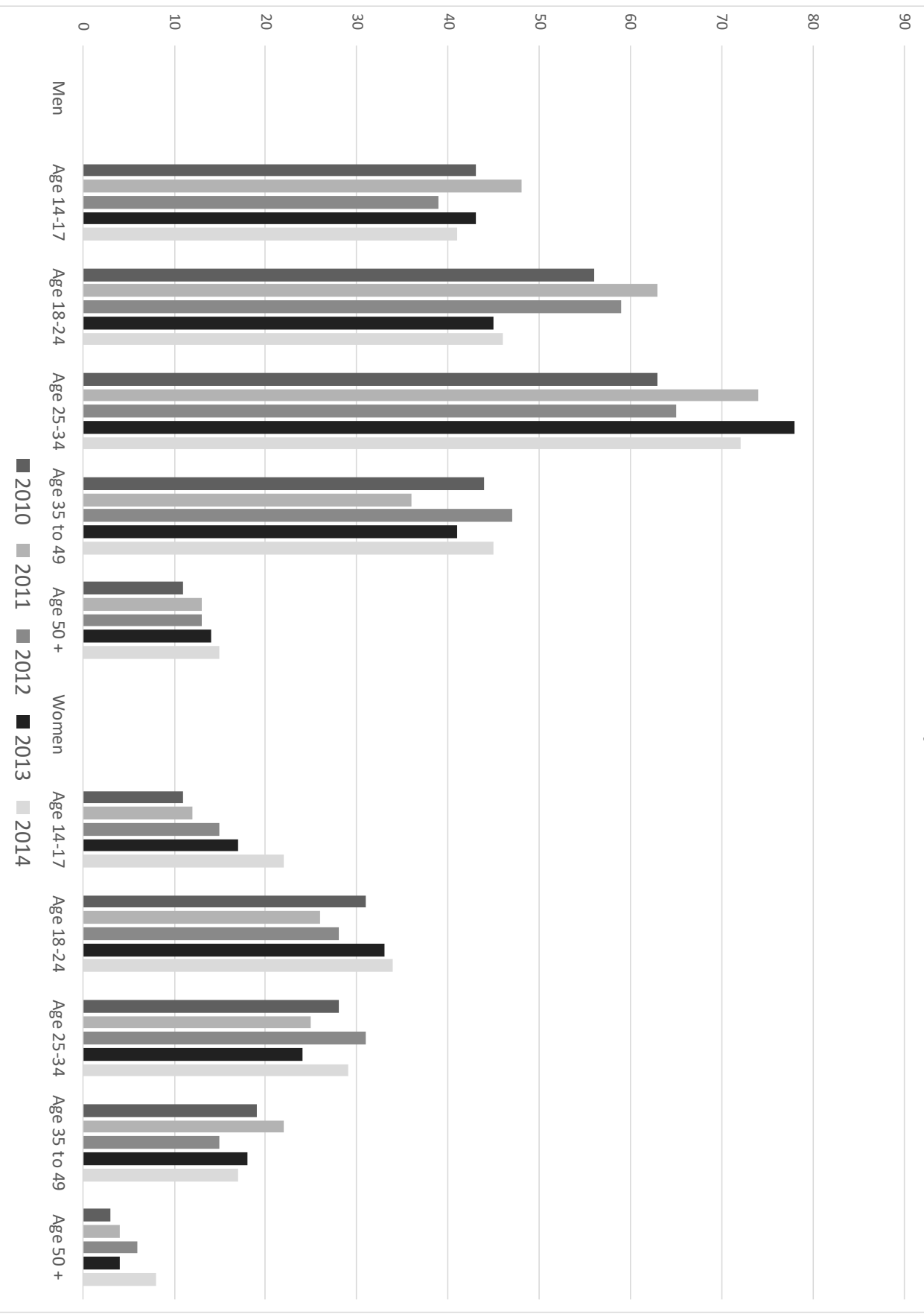
- |  |              |  |              |
|--|--------------|--|--------------|
|  | Scuba Diving |  | Airport      |
|  | Fishing Pier |  | Public Beach |
|  | Surfing      |  | Marina       |
|  | Restaurant   |  | Ferry Dock   |
|  | Horse Riding |  | Ferry Route  |
|  | Hospital     |  | Resort       |
|  | Lagoon       |  |              |
- 1 inch = 2 miles

Insert not to scale

## Two Sisters Islands

16. What is the scale of the insert?
- One inch equals two miles
  - One inch equals four miles
  - One inch equals eight miles
  - Not indicated
17. How many horse riding recreation areas are shown on the map?
- 0
  - 1
  - 2
  - 3
18. How many private beaches are shown on the map?
- 0
  - 1
  - 8
  - 9
19. The ferry docks in what area of Maria Island?
- Southeast
  - Southwest
  - Northeast
  - Northwest
20. The insert shows detail for what?
- Sunrise Resort
  - Surf Resort
  - Maria Island
  - Island Life Resort
21. Which reef is the furthest north?
- Red Reef
  - Big Wall Reef
  - Bright Reef
  - South Reef
22. What does the line with alternating dashes and dots indicate?
- Ferry Route
  - Island Road
  - Island Boundary
  - Nature Preserve Boundary
23. Using the main island roads shown on the map, which resort has the shortest drive to the airport?
- Island Life Resort
  - Sunrise Resort
  - Surf Resort
  - Big Wall Resort
24. Surf Resort is located on what area of Tanya Island?
- Southeast
  - Southwest
  - Northeast
  - Northwest
25. How many restaurants are shown on Maria Island?
- 0
  - 1
  - 8
  - 9
- TRUE/FALSE**
26. The map insert shows Surf Resort has direct access to a private beach.
27. Black Beach Resort is located on Maria Island.
28. The Sunrise Resort's Spa is just east of the main resort building.
29. Dolphin Beach is the beach located closest to the nature preserve.
30. Tanya Island is six miles west of the mainland.

### Surfer Numbers on Maria Island By Year and Gender



## Surfer Numbers on Maria Island by Year and Gender

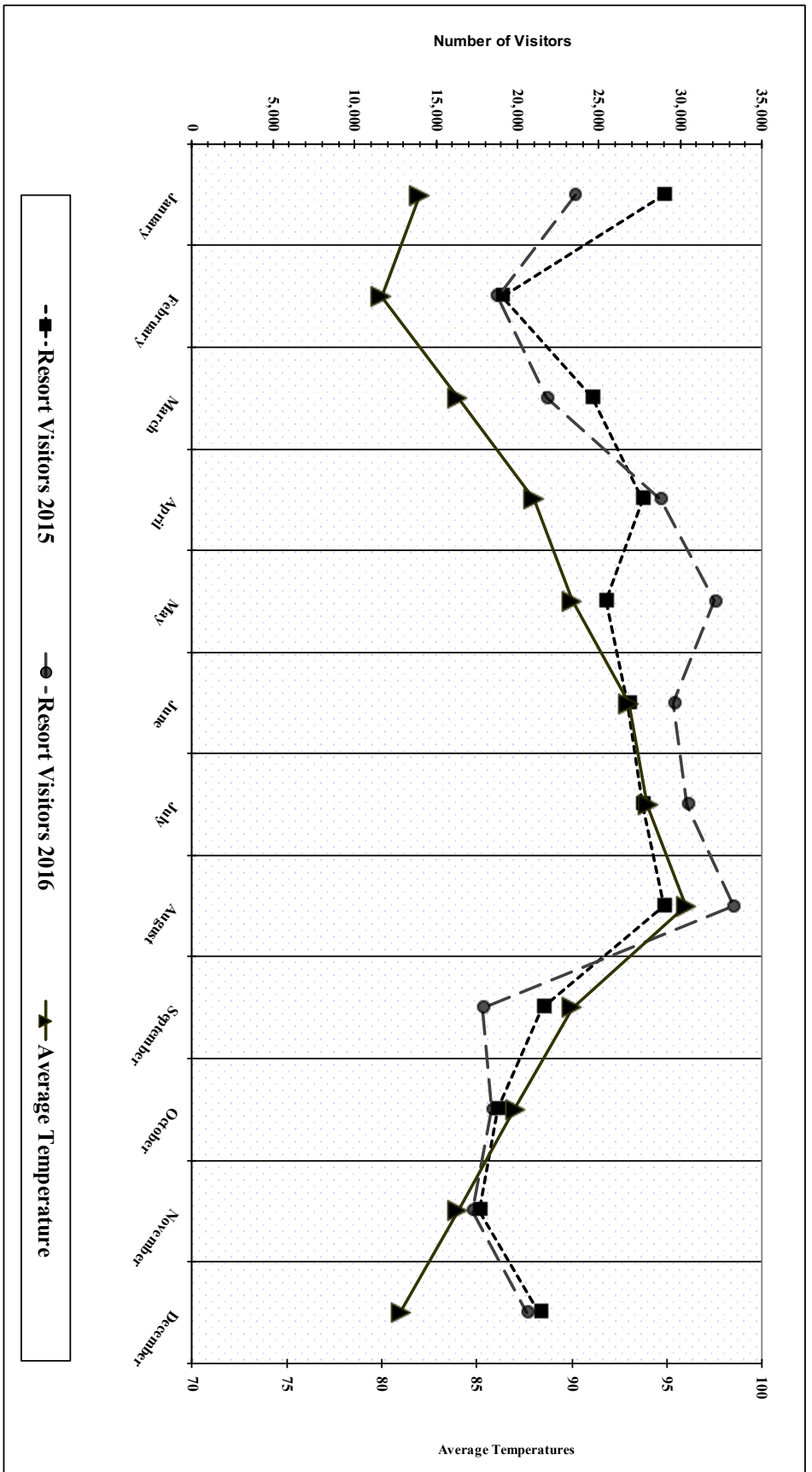
31. How many years are represented on the graph?
- 2
  - 3
  - 4
  - 5
32. What does the darkest column represent?
- 2010
  - 2011
  - 2012
  - 2013
33. What year had the lowest number of female surfers between the age of 18 to 24?
- 2010
  - 2011
  - 2012
  - 2013
34. Males between the age of 25-34 had the highest number of surfers in how many years?
- 0
  - 3
  - 5
  - 7
35. How many categories of surfers are shown on the chart?
- 2
  - 5
  - 10
  - 15
36. Which of the following categories had the lowest number of surfers for all years combined?
- Men age 18-24
  - Men age 50+
  - Women age 14-17
  - Women age 35-49
37. Which of the following categories stayed above 40 surfers in every year?
- Men age 18-24
  - Men age 14-17
  - Men age 50+
  - Women age 18-24.
38. In how many years were there more male surfers between 14 to 17 than male surfers age 35 to 49?
- 0
  - 1
  - 2
  - 3
39. Which year saw the highest increase in female surfers between the ages of 18-24 from the previous year?
- 2010
  - 2011
  - 2012
  - 2013
40. In how many years, in any single category, did the number of surfers surpass 70?
- 0
  - 1
  - 3
  - 5
- TRUE/FALSE**
41. The only category that had increases in the number of surfers every year was women age 14-17.
42. For women, the year with the highest number of surfers for all age categories combined was 2014.
43. The category of men age 50+ never saw a decrease in the number of surfers.
44. 2014 saw the biggest jump in male surfers ages 25 to 34 from the previous year.
45. The category of women age 18-24 had the highest number of female surfers every year.

**THIS PAGE IS INTENTIONALLY BLANK.**

## Africa

46. What area of Egypt has the highest population density?
- The eastern coast
  - The southern border
  - The western border
  - The central area around the Nile River
47. The Erg Iguidi extends through which of the following countries?
- Mauritania
  - South Africa
  - Somalia
  - None of the above
48. The largest urban center is in what area of the continent?
- Northwest
  - Northeast
  - Southwest
  - Southeast
49. Tropical rainforest can be found in which of the following countries?
- Cameroon
  - Libya
  - Namibia
  - Tunisia
50. Which of the following lakes was formed by the same forces that produced the Great Rift Valley?
- Lake Victoria
  - Lake Volta
  - Lake Nyasa
  - Lake Chad
51. What does a line of red dots on the map indicate?
- Continental Boundary
  - International Boundary
  - Disputed Boundary
  - Longitudinal Line
52. Which of the following is not located on the shores of the Gulf of Guinea?
- Lagos, Nigeria
  - Maroua, Cameroon
  - Accra, Ghana
  - Lome, Togo
53. Which country does not contain part of the Sahara inside of it?
- Angola
  - Algeria
  - Libya
  - Mali
54. Where does Algeria import the most goods from?
- The United States
  - The European Union
  - Russia
  - China
55. Cotonou is one of the capitals of what country?
- Togo
  - Niger
  - Senegal
  - Benin
56. The Mbomou River forms the northern border of what country?
- Democratic Republic of the Congo
  - Central African Republic
  - South Sudan
  - Chad
57. Which of the following countries has the highest amount of rainfall?
- Sierra Leone
  - Somalia
  - Namibia
  - Tunisia
58. The continent is divided physically and culturally by what feature?
- A lake
  - A mountain range
  - A desert
  - A forest
59. The capital of what country is located on the island of Bioko?
- Angola
  - Ghana
  - Swaziland
  - Equatorial Guinea
60. How far is it from the capital of Kenya to the capital of Gabon?
- About 2,000 kilometers
  - About 3,000 kilometers
  - About 4,000 kilometers
  - About, 5,000 kilometers

Royal Mountain State Park  
 Visitors 2012 and 2013 and Average Monthly Temperatures



## Resort Visitor and Temperature Data

61. What does the line with round connectors represent?
- February
  - Resort visitors for the year 2015
  - Resort visitors for the year 2016
  - The average temperature for the month
62. How many years are represented?
- 2
  - 3
  - 4
  - 5
63. What month had the lowest average temperature?
- January
  - February
  - November
  - December
64. What do the numbers on the right side of the Y axis represent?
- Number of visitors
  - Temperature
  - Month
  - Year
65. Which of the following months had the least amount of difference in visitors between 2015 and 2016?
- January
  - February
  - June
  - July
66. Which month had the largest decrease in visitors compared to the previous year?
- September
  - October
  - November
  - December
67. How many times did visitor numbers increase compared to the prior year?
- 0
  - 3
  - 5
  - 9
68. In 2015, which of the following months had the highest number of visitors?
- June
  - July
  - August
  - September
69. What month had the lowest amount of visitors?
- February, 2015
  - March, 2016
  - September, 2016
  - December, 2015
70. In how many months did the average temperature fall below 90 degrees?
- 9
  - 6
  - 7
  - 11
- TRUE/FALSE**
71. The solid line details the high temperature recorded for each month.
72. The month with the lowest temperature also had the fewest visitors in 2015.
73. In both 2015 and 2016, visitor numbers fall in the month of February compared to the previous month.
74. The biggest drop in visitor numbers happened in September of 2016.
75. Average temperatures rise after February and keep rising through August.





**University Interscholastic League**  
**A+ Maps/Graphs/Charts Contest • 2019-2020**  
**7/8 Spring District**  
**Answer Key**

1. D	26. F	51. C
2. B	27. F	52. B
3. A	28. T	53. A
4. C	29. T	54. B
5. A	30. T	55. D
6. B	31. D	56. A
7. D	32. D	57. A
8. C	33. B	58. C
9. A	34. C	59. D
10. D	35. C	60. B
11. B	36. B	61. C
12. D	37. A	62. A
13. A	38. C	63. B
14. A	39. D	64. B
15. B	40. C	65. B
16. A	41. T	66. A
17. C	42. T	67. C
18. B	43. T	68. C
19. B	44. F	69. C
20. A	45. F	70. A
21. C	46. D	71. F
22. D	47. A	72. F
23. A	48. B	73. T
24. B	49. A	74. T
25. A	50. C	75. T